

6只小兔按特征分成两类，可以有几种分法？

6

6

6

□ □

□ □

□ □

乌龟送信，请你把乌龟和信封上的数字合起来是6的，用线连起来。

1

2

3

4

5

5


3

1


2

4


请你看图列出算式。



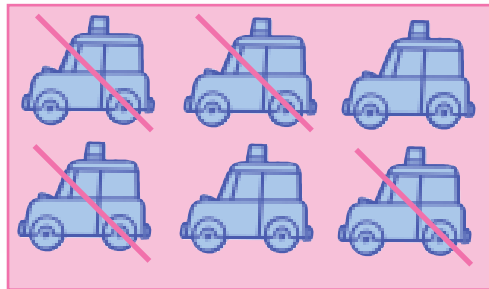
$$\square - \square = \square$$



$$\square - \square = \square$$



$$\square - \square = \square$$



$$\square - \square = \square$$

$$4 - 1 = \square$$

$$5 - 1 = \square$$

$$5 - 2 = \square$$

$$6 - 1 = \square$$

$$6 - 2 = \square$$

$$4 - 3 = \square$$


$$5 - 4 = \square$$

$$5 - 3 = \square$$


$$6 - 5 = \square$$

$$6 - 4 = \square$$

7只小企鹅按特征分成两类，可以有几种分法？



请将左右两栏的螃蟹合起来是7的，用线连起来。





博士娃学前准备

请给正确的答案涂上颜色。

$7 - 1 =$			
$7 - 2 =$			
$7 - 3 =$			
$7 - 4 =$			
$7 - 5 =$			
$7 - 6 =$			
$7 - 7 =$			

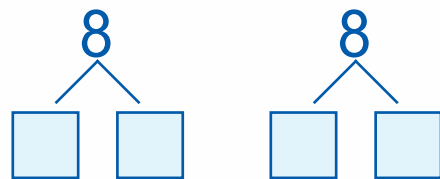
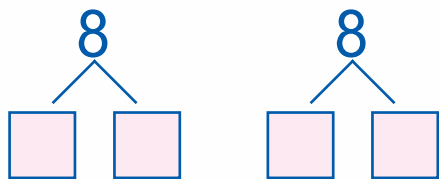
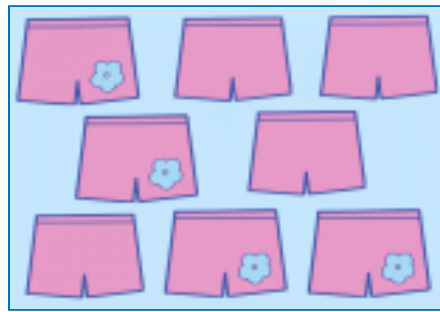
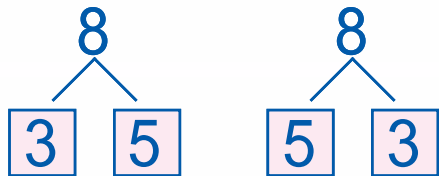
请把答案相同的气球用线连起来。

7 - 5      7 - 4     

6 - 2     

6 - 1

请把下面每一种东西都分成两类，并在 内填上数字。



8 - 1 = ○

8 - 2 = ○

8 - 3 = ○

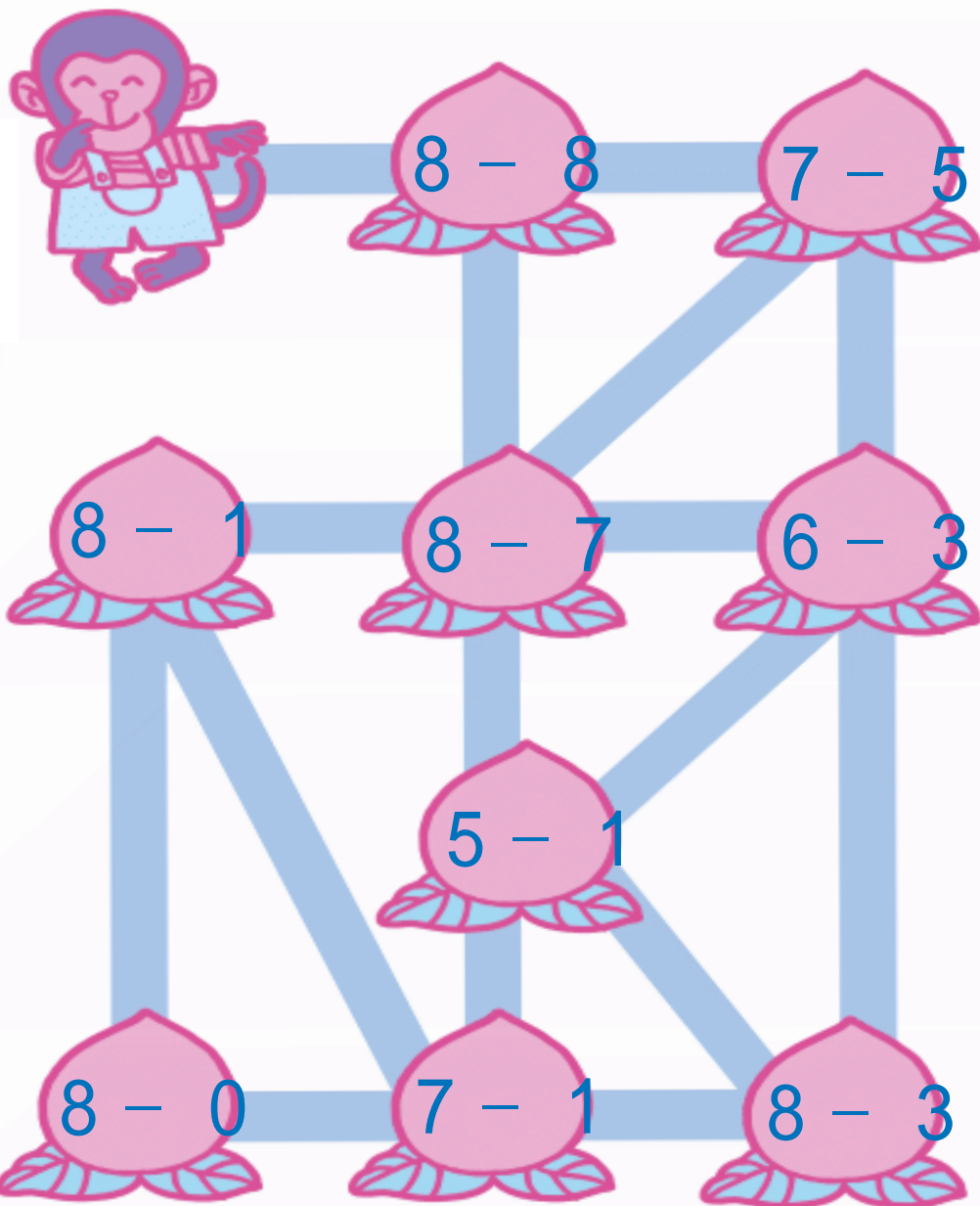
8 - 7 = ○

8 - 6 = ○

8 - 5 = ○





小猴子想按从小到大的顺序吃光树上所有的桃子，它该怎么走？你能帮帮它吗？



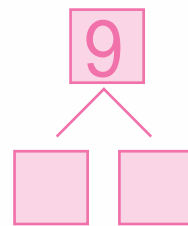
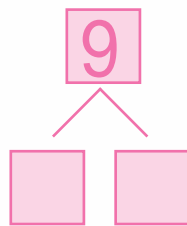
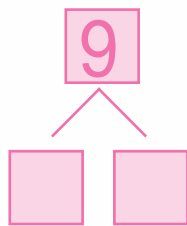
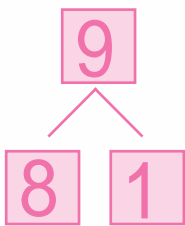
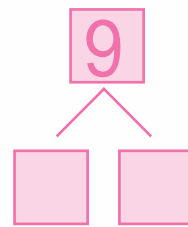
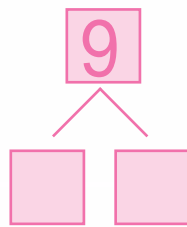
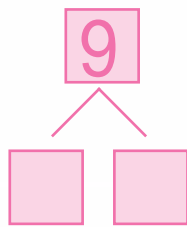
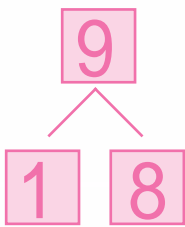
6

博士娃学前准备

左右两边哪两栏小猪合起来是9，用线连起来。

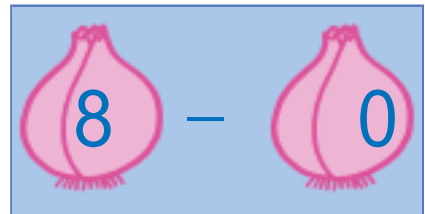
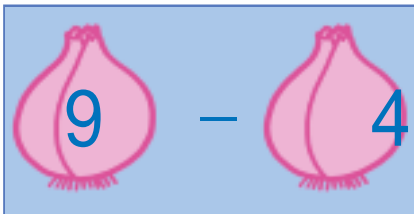
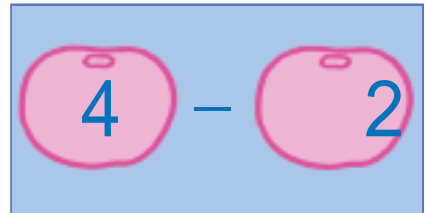
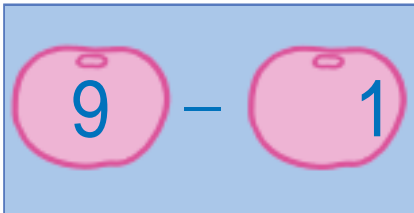
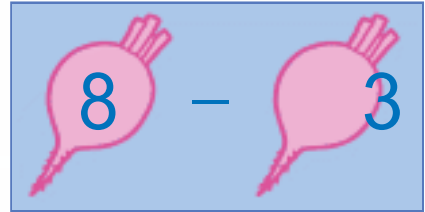
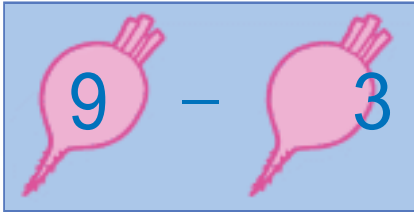
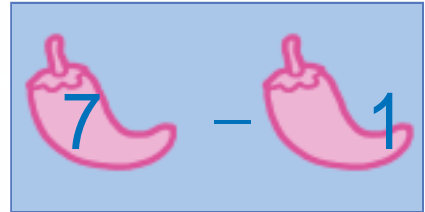
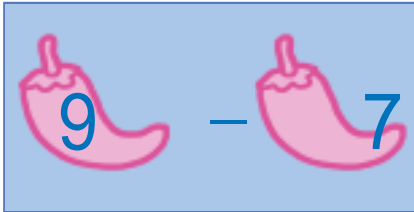


现在让我们想想9可以分成几和几？





请把相同的答案用线连起来。



$2 - 1 = \square$

$6 - 1 = \square$

$3 - 1 = \square$

$7 - 1 = \square$

$4 - 1 = \square$

$8 - 1 = \square$

$5 - 1 = \square$

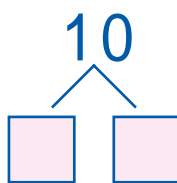

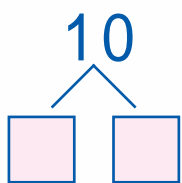

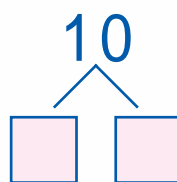

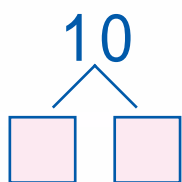

$9 - 1 = \square$

博士娃学前准备

8



下面的图中都有 10 只苹果，请在 内填上数字。



$10 - 1 = \square$

$10 - 2 = \square$

$10 - 3 = \square$

$10 - 4 = \square$

$10 - 9 = \square$

$10 - 8 = \square$

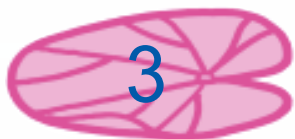
$10 - 7 = \square$

$10 - 6 = \square$



请你帮青蛙宝宝找到它们自己的荷叶，用线连起来。

10



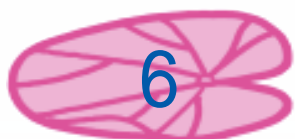
3




5



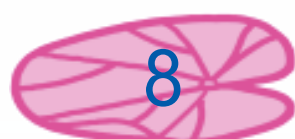
7




6



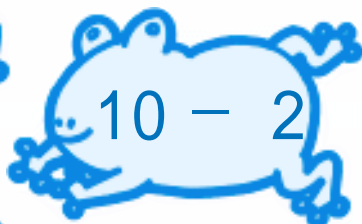
4



8




$10 - 1$



$10 - 2$



9




$9 - 3$




$7 - 4$



$10 - 6$



$8 - 1$



$10 - 5$

博士娃  
学前准备

你能很快地做完下面的题目吗？

1  $10 - 9 = \square$

2  $9 - 7 = \square$

3  $8 - 4 = \square$

4  $7 - 5 = \square$

5  $6 - 3 = \square$

6  $5 - 2 = \square$

7  $10 - 5 = \square$

8  $7 - 4 = \square$

9  $4 - 2 = \square$

10  $8 - 5 = \square$

11  $10 - 2 = \square$

12  $9 - 3 = \square$

13  $3 - 2 = \square$

14  $6 - 4 = \square$

15  $9 - 5 = \square$

16  $8 - 2 = \square$

17  $7 - 3 = \square$

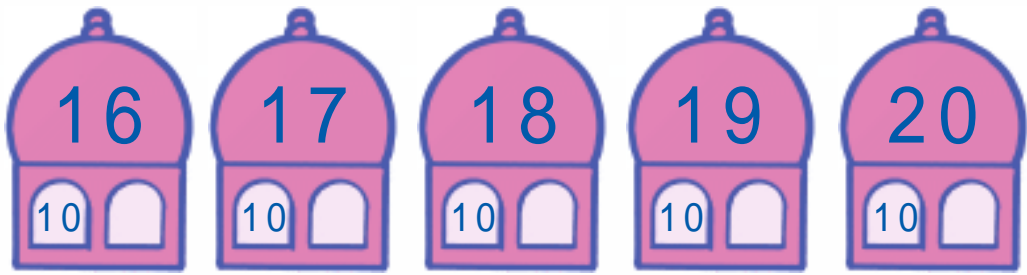

18  $5 - 4 = \square$



12

博士娃  
学前准备

搭房子，请把数字填进去。



你能做得又快又对吗？

$10 + 2 = \square$      $10 + 5 = \square$      $10 + 7 = \square$

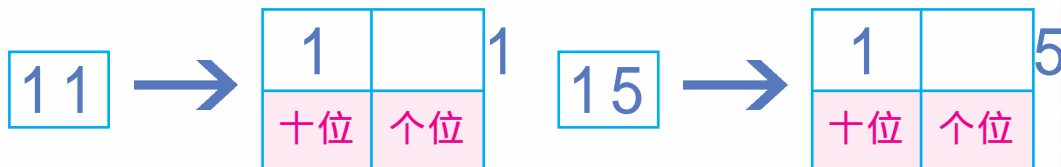
$12 - 2 = \square$      $15 - 5 = \square$      $17 - 7 = \square$

$10 + 3 = \square$      $10 + 6 = \square$      $10 + 9 = \square$

$13 - 3 = \square$      $16 - 6 = \square$      $19 - 9 = \square$

现在我们来学习一种新的算法。

认识个位和十位。



当被减数的个位数值大于或等于减数时，

$$15 - 3 = \boxed{?} \quad (\text{被减数的个位数是5, 5大于减数3})$$

第一步：把 15 分成 10 和 5

$$\text{第二步：} \quad 5 - 3 = 2$$

$$10 + 2 = 12$$

所以：  $15 - 3 = 12$

当被减数的个位数值小于减数时，

$$11 - 2 = \boxed{?} \quad (\text{被减数的个位数是1, 1小于减数2})$$

第一步：把 11 分成 10 和 1

$$\text{第二步：} \quad 10 - 2 = 8$$

$$8 + 1 = 9$$

所以：  $11 - 2 = 9$



你可以按刚学过的算法算出答案吗？

14

博士娃学前准备

$$11 - 1 = \square$$

第一步：

第二步：

$$11 - 4 = \square$$

第一步：

第二步：

$$11 - 6 = \square$$

第一步：

第二步：



$$11 - 8 = \square$$

第一步：

第二步：

$$11 - 3 = \square$$

第一步：

第二步：

$$11 - 5 = \square$$

第一步：










第二步：

$$11 - 7 = \square$$

第一步：

第二步：

每一个热气球上都有一组数字,请把它们相减后的答案写在下面的篮子上。



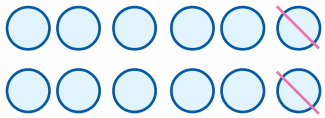


请把答案写在铅笔头上，并把多余的圈圈划掉。

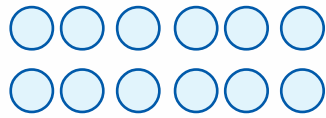
16

博士娃  
学前准备

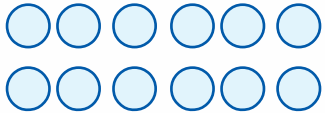
$12 - 2 =$



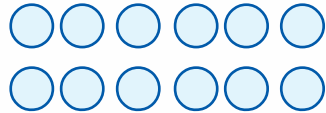
$12 - 3 =$



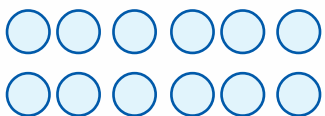
$12 - 4 =$



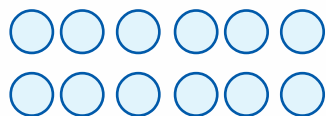
$12 - 5 =$



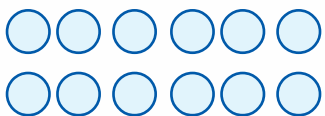
$12 - 6 =$



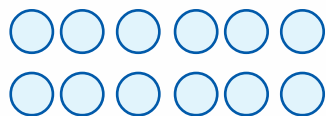
$12 - 7 =$



$12 - 8 =$



$12 - 9 =$



请按步骤计算。

$$12 - 3 = \square$$

第一步:

第二步:

$$12 - 8 = \square$$

第一步:

第二步:

$$12 - 6 = \square$$

第一步:

第二步:

$$12 - 7 = \square$$

第一步:

第二步:

小海狮顶皮球，你能帮帮忙吗？请画线连起来。

