


請用
神秘解題卡

幼兒天天練



減法



馬為什麼經常甩尾巴？

中國少年兒童出版社

YOU ER TIAN TIAN LIAN

◆ 出版发行：中国少年儿童出版社
出版人：/ / / / /

作者：吴仁佑
责任编辑：韩娟

美术编辑：太阳花儿童工场
责任印务：栾永生

社址：北京东四十二条21号
电话：086-010-64032266

邮政编码：100708
传 真：086-010-64177391

印刷：北京中国人民大学印刷厂
开本：787×1092 1/16

经销：新华书店
印张：2

2003年7月北京第1版

2003年7月北京第1次印刷
印数：20000册

ISBN 7-5007-6477-4/G·5040


定价：36.00元（全六册）

图书若有印装问题，请随时向印刷厂退换。
版权所有，侵权必究。



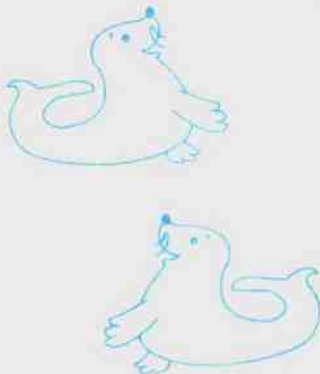



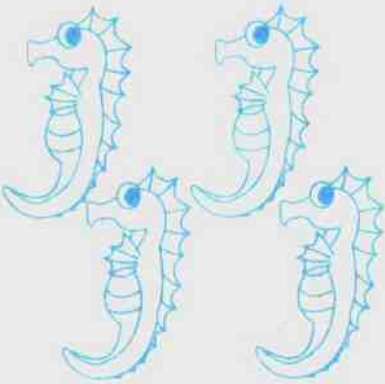




基础减法运算



2-1	3-1	4-1	5-1	6-1	7-1	8-1	9-1	10-1
	3-2	4-2	5-2	6-2	7-2	8-2	9-2	10-2
		4-3	5-3	6-3	7-3	8-3	9-3	10-3
			5-4	6-4	7-4	8-4	9-4	10-4
				6-5	7-5	8-5	9-5	10-5
					7-6	8-6	9-6	10-6
						8-7	9-7	10-7
							9-8	10-8
								10-9











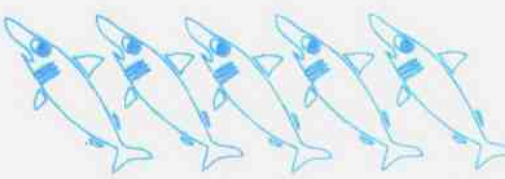



下列图上有什么?分别是几个?请你把正确的答案写在空格里



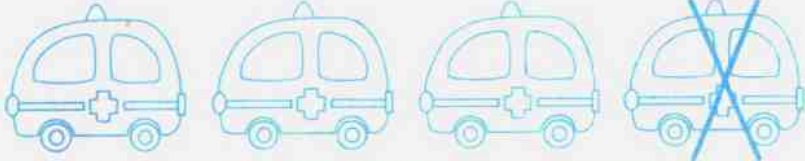

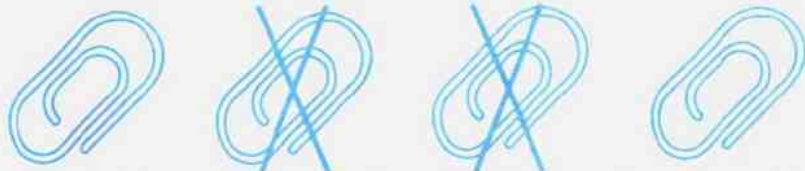

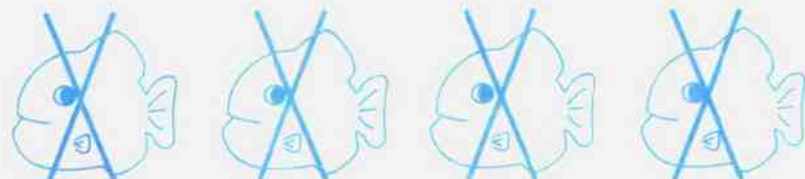

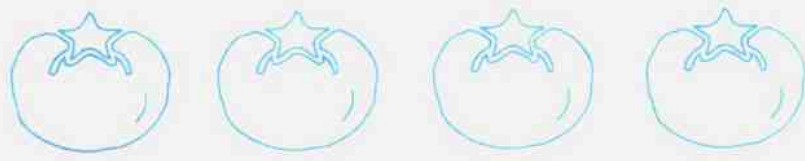

 <input type="checkbox"/> 	 <input type="checkbox"/> 
 <input type="checkbox"/> 	 <input type="checkbox"/> 
 <input type="checkbox"/> 	<p>小知识</p>  <p>狗在夏天为什么经常伸出舌头?</p>



数一数每一组图中动物的数量, 选出正确答案写在空格里。

	1 2 3 4 5	<input type="checkbox"/>	
	1 2 3 4 5	<input type="checkbox"/>	
	1 2 3 4 5	<input type="checkbox"/>	
	1 2 3 4 5	<input type="checkbox"/>	
	1 2 3 4 5	<input type="checkbox"/>	
	1 2 3 4 5	<input type="checkbox"/>	

想一想, 图中物品剩下几个? 请写在空格里













	$\begin{array}{r} 4 \\ - 3 \\ \hline \square \end{array}$	
	$\begin{array}{r} 4 \\ - 1 \\ \hline \square \end{array}$	
	$\begin{array}{r} 4 \\ - 2 \\ \hline \square \end{array}$	
	$\begin{array}{r} 4 \\ - 4 \\ \hline \square \end{array}$	
	$\begin{array}{r} 4 \\ - 0 \\ \hline \square \end{array}$	

小知识











蟋蟀是用嘴鸣叫的吗?



请你把计算结果写在空格里

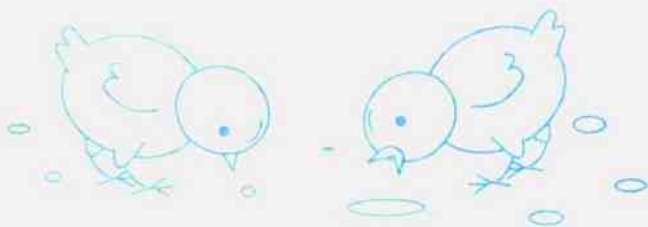
	$\begin{array}{r} 5 \\ - 2 \\ \hline \square \end{array}$	
	$\begin{array}{r} 5 \\ - 1 \\ \hline \square \end{array}$	
	$\begin{array}{r} 5 \\ - 3 \\ \hline \square \end{array}$	
	$\begin{array}{r} 5 \\ - 4 \\ \hline \square \end{array}$	
	$\begin{array}{r} 5 \\ - 0 \\ \hline \square \end{array}$	
	$\begin{array}{r} 5 \\ - 5 \\ \hline \square \end{array}$	

想一想,看谁算得又快又好



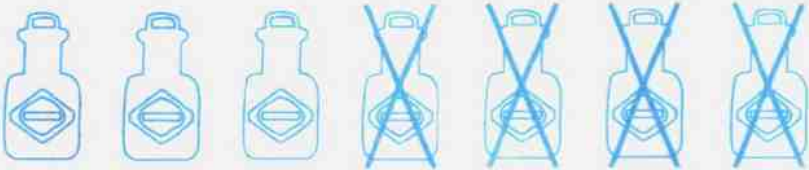



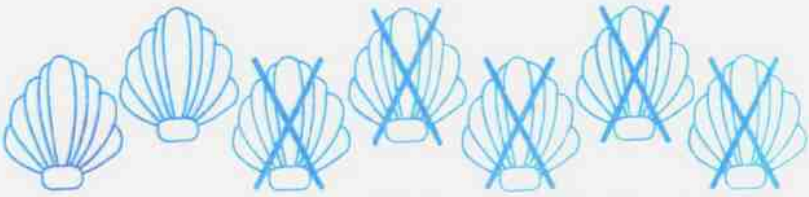



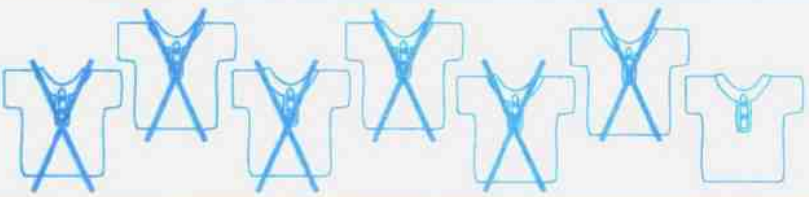

	$\begin{array}{r} 6 \\ - 3 \\ \hline \square \end{array}$ 
	$\begin{array}{r} 6 \\ - 1 \\ \hline \square \end{array}$ 
	$\begin{array}{r} 6 \\ - 2 \\ \hline \square \end{array}$ 
	$\begin{array}{r} 6 \\ - 4 \\ \hline \square \end{array}$ 
	$\begin{array}{r} 6 \\ - 5 \\ \hline \square \end{array}$ 

小知识











鸡为什么喜欢吃小石子?



你能马上把计算结果写下来吗?

	$\begin{array}{r} 7 \\ - 2 \\ \hline \square \end{array}$	
	$\begin{array}{r} 7 \\ - 4 \\ \hline \square \end{array}$	
	$\begin{array}{r} 7 \\ - 7 \\ \hline \square \end{array}$	
	$\begin{array}{r} 7 \\ - 5 \\ \hline \square \end{array}$	
	$\begin{array}{r} 7 \\ - 3 \\ \hline \square \end{array}$	
	$\begin{array}{r} 7 \\ - 6 \\ \hline \square \end{array}$	

认真想一想, 然后把正确答案写在空格里。













	$\begin{array}{r} 8 \\ - 6 \\ \hline \square \end{array}$ 
	$\begin{array}{r} 8 \\ - 5 \\ \hline \square \end{array}$ 
	$\begin{array}{r} 8 \\ - 4 \\ \hline \square \end{array}$ 
	$\begin{array}{r} 8 \\ - 2 \\ \hline \square \end{array}$ 
	$\begin{array}{r} 8 \\ - 3 \\ \hline \square \end{array}$ 

小知识

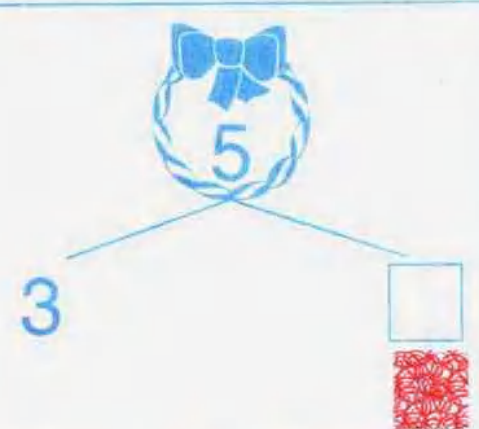
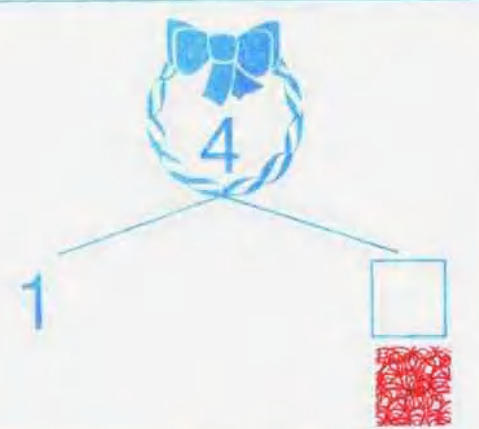
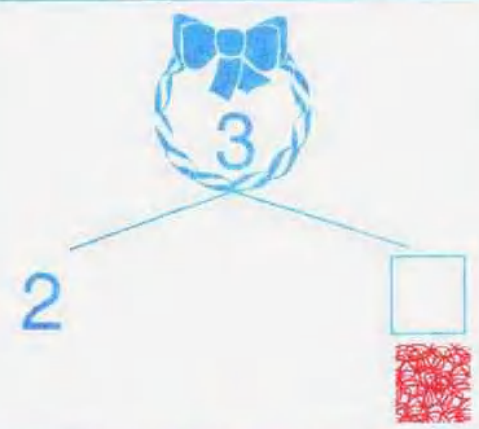

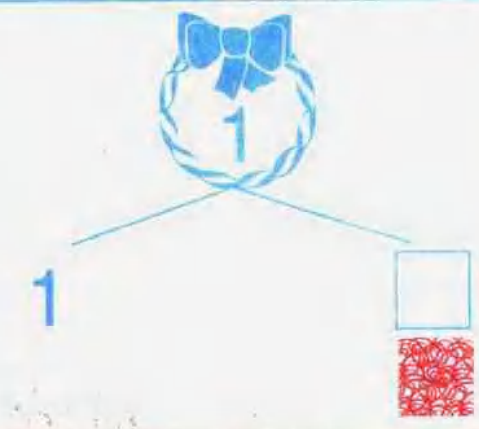

为什么我们看不到海星的嘴?



你能做对这几道题吗?

	$\begin{array}{r} 9 \\ - 5 \\ \hline \square \end{array}$ 
	$\begin{array}{r} 9 \\ - 3 \\ \hline \square \end{array}$ 
	$\begin{array}{r} 9 \\ - 4 \\ \hline \square \end{array}$ 
	$\begin{array}{r} 9 \\ - 2 \\ \hline \square \end{array}$ 
	$\begin{array}{r} 9 \\ - 6 \\ \hline \square \end{array}$ 
	$\begin{array}{r} 9 \\ - 7 \\ \hline \square \end{array}$ 

花环里的数字可以分成几和几?想一想,还有没有其它的分法?

	
	
	<p>小知识</p>  <p>动物世界里谁有“老寿星”的称号?</p>



请你用最短的时间,把答案写在空格里

$2 - 1 = \square$

$3 - 3 = \square$

$3 - 2 = \square$

$5 - 2 = \square$

$4 - 1 = \square$

$4 - 0 = \square$

$3 - 1 = \square$

$1 - 1 = \square$

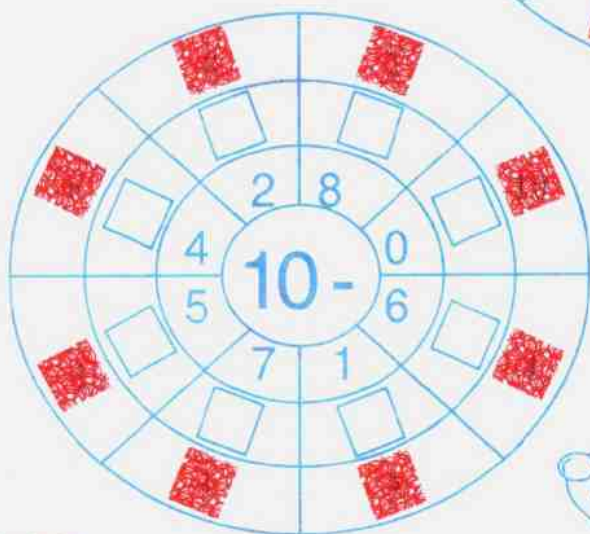
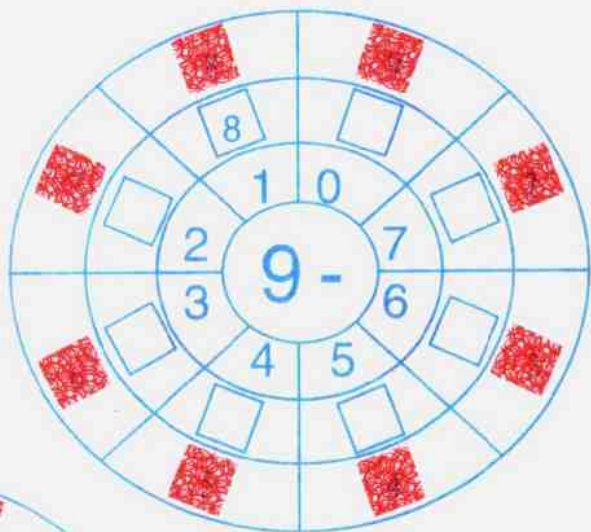
$5 - 4 = \square$

$5 - 0 = \square$

$1 - 0 = \square$

$5 - 5 = \square$

按照例题, 请你把答案写在相应的空格里。





小知识


老鼠为什么总啃东西?





想一想,算一算,空格里应该是几?


$$5 - \square = 4$$



$$3 - \square = 2$$



$$5 - \square = 3$$



$$2 - \square = 1$$



$$4 - \square = 1$$



$$1 - \square = 0$$



$$3 - \square = 2$$


$$5 - \square = 5$$


$$2 - \square = 2$$


$$4 - \square = 3$$


$$1 - \square = 0$$


$$3 - \square = 1$$


请你用最短的时间,把空格里的数字写下来。

$$\square - 2 = 3$$



$$\square - 3 = 1$$



$$\square - 4 = 0$$



$$\square - 0 = 2$$



$$\square - 2 = 5$$



$$\square - 2 = 4$$



$$\square - 1 = 2$$



小知识

$$\square - 1 = 4$$




$$\square - 3 = 3$$



什么动物是被人类首先驯化成功的?




认真想一想,一步一步算,把答案写在空格里。

$5 - 1 - 2 = \square$ 

$8 - 2 - 4 = \square$ 

$6 - 2 - 4 = \square$ 


$5 - 4 - 1 = \square$ 


$7 - 3 - 3 = \square$ 

$6 - 0 - 3 = \square$ 

$4 - 1 - 1 = \square$ 

$3 - 1 - 1 = \square$ 

$8 - 0 - 5 = \square$ 

$4 - 2 - 0 = \square$ 

$9 - 4 - 3 = \square$ 

$7 - 5 - 0 = \square$ 