


请用
神秘解题卡

幼儿天天练



乘法



螃蟹为什么吐泡沫?



YOU ER TIAN TIAN LIAN

◆ 出版发行：中国少年儿童出版社
出版人：/ / / / /

作者：吴仁佑
责任编辑：韩娟

美术编辑：太阳花儿童工场
责任印务：梁永生

社址：北京东四十二条21号
电话：086-010-64032266

邮政编码：100708
传真：086-010-64177391

印刷：北京中国人民大学印刷厂
开本：787×1092 1/16

经销：新华书店
印张：2

2003年7月北京第1版

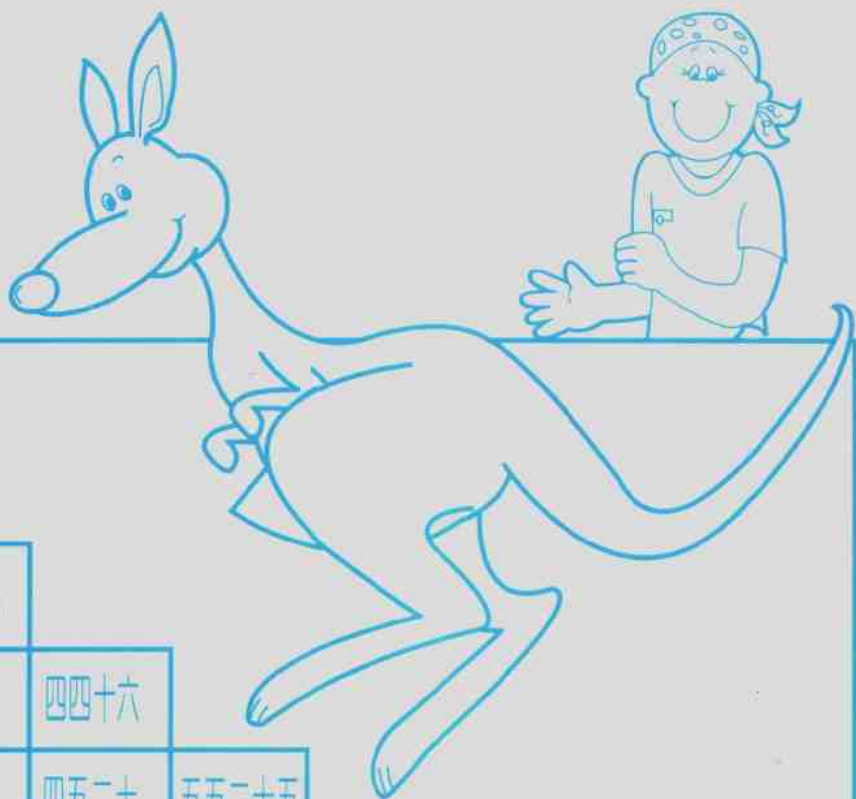
2003年7月北京第1次印刷
印数：20000册

ISBN 7-5007-6477-4 G·5040

定价：36.00元（全六册）

图书若有印装问题，请随时向印刷厂退换。
版权所有，侵权必究。

乘法口诀表



一一得一									
一二得二	二二得四								
一三得三	二三得六	三三得九							
一四得四	二四得八	三四十二	四四十六						
一五得五	二五一十	三五十五	四五二十	五五二十五					
一六得六	二六十二	三六十八	四六二十四	五六三十	六六三十六				
一七得七	二七十四	三七二十一	四七二十八	五七三十五	六七四十二	七七四十九			
一八得八	二八十六	三八二十四	四八三十二	五八四十	六八四十八	七八五十六	八八六十四		
一九得九	二九十八	三九二十七	四九三十六	五九四十五	六九五十四	七九六十三	八九七十二	九九八十一	

用乘法口诀,把答案写在空格里。

$$\begin{array}{r} 5 \\ \times 2 \\ \hline \square \\ \text{■} \end{array}$$

$$\begin{array}{r} 1 \\ \times 3 \\ \hline \square \\ \text{■} \end{array}$$

$3 \times 2 = \square \text{ ■}$

$5 \times 3 = \square \text{ ■}$

$3 \times 3 = \square \text{ ■}$

$2 \times 2 = \square \text{ ■}$

$7 \times 3 = \square \text{ ■}$

$8 \times 2 = \square \text{ ■}$

$$\begin{array}{r} 2 \\ \times 3 \\ \hline \square \\ \text{■} \end{array}$$

$$\begin{array}{r} 4 \\ \times 3 \\ \hline \square \\ \text{■} \end{array}$$


小知识

$$\begin{array}{r} 7 \\ \times 2 \\ \hline \square \\ \text{■} \end{array}$$

$$\begin{array}{r} 2 \\ \times 4 \\ \hline \square \\ \text{■} \end{array}$$




数一数,算一算,然后把答案写在空格里。




$$2 + 2 = \square \quad \text{[Red pattern]}$$

$$2 \times 2 = \square \quad \text{[Red pattern]}$$



$$2 + 2 + 2 = \square \quad \text{[Red pattern]}$$

$$2 \times 3 = \square \quad \text{[Red pattern]}$$



$$2 + 2 + 2 + 2 = \square \quad \text{[Red pattern]}$$

$$2 \times 4 = \square \quad \text{[Red pattern]}$$

$$\begin{array}{r} 2 \\ \times 2 \\ \hline \end{array}$$

$$\square \quad \text{[Red pattern]}$$

$$\begin{array}{r} 2 \\ \times 3 \\ \hline \end{array}$$

$$\square \quad \text{[Red pattern]}$$

$$\begin{array}{r} 2 \\ \times 4 \\ \hline \end{array}$$

$$\square \quad \text{[Red pattern]}$$

请你用最短的时间,把计算结果写在空格里。

$$\begin{array}{r} 4 \\ \times 2 \\ \hline \square \\ \text{[Red Pattern]} \end{array}$$

$$\begin{array}{r} 8 \\ \times 3 \\ \hline \square \\ \text{[Red Pattern]} \end{array}$$

$2 \times 6 = \square \text{ [Red Pattern]}$

$4 \times 5 = \square \text{ [Red Pattern]}$

$3 \times 9 = \square \text{ [Red Pattern]}$

$2 \times 8 = \square \text{ [Red Pattern]}$

$2 \times 7 = \square \text{ [Red Pattern]}$

$2 \times 2 = \square \text{ [Red Pattern]}$


$$\begin{array}{r} 5 \\ \times 2 \\ \hline \square \\ \text{[Red Pattern]} \end{array}$$

$$\begin{array}{r} 6 \\ \times 3 \\ \hline \square \\ \text{[Red Pattern]} \end{array}$$

小知识

$$\begin{array}{r} 9 \\ \times 2 \\ \hline \square \\ \text{[Red Pattern]} \end{array}$$


$$\begin{array}{r} 3 \\ \times 3 \\ \hline \square \\ \text{[Red Pattern]} \end{array}$$



白兔的眼球本身是无色的。
为什么眼睛是红色的？




比一比,想一想,算出答案



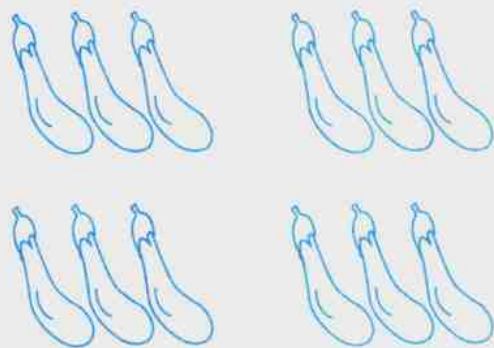
$$3 + 3 = \square \quad \text{[Red patterned box]}$$

$$3 \times 2 = \square \quad \text{[Red patterned box]}$$



$$3 + 3 + 3 = \square \quad \text{[Red patterned box]}$$

$$3 \times 3 = \square \quad \text{[Red patterned box]}$$



$$3 + 3 + 3 + 3 = \square \quad \text{[Red patterned box]}$$

$$3 \times 4 = \square \quad \text{[Red patterned box]}$$

$$\begin{array}{r} 3 \\ \times 2 \\ \hline \square \end{array} \quad \text{[Red patterned box]}$$

$$\begin{array}{r} 3 \\ \times 3 \\ \hline \square \end{array} \quad \text{[Red patterned box]}$$

$$\begin{array}{r} 3 \\ \times 4 \\ \hline \square \end{array} \quad \text{[Red patterned box]}$$

空格里应该是几, 请你把它写下来。

$$\begin{array}{r} 2 \\ \times \square \\ \hline \end{array}$$

2

$$\begin{array}{r} 1 \\ \times \square \\ \hline \end{array}$$

3

$$4 \times \square = 16$$

$$3 \times \square = 9$$

$$\begin{array}{r} 2 \\ \times \square \\ \hline \end{array}$$

6

$$\begin{array}{r} 3 \\ \times \square \\ \hline \end{array}$$

9

$$1 \times \square = 5$$

$$7 \times \square = 0$$

$$\begin{array}{r} 4 \\ \times \square \\ \hline \end{array}$$

8

$$\begin{array}{r} 2 \\ \times \square \\ \hline \end{array}$$

12


小知识

$$\begin{array}{r} 3 \\ \times \square \\ \hline \end{array}$$

12

$$\begin{array}{r} 3 \\ \times \square \\ \hline \end{array}$$


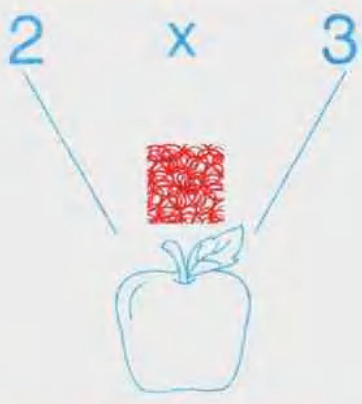


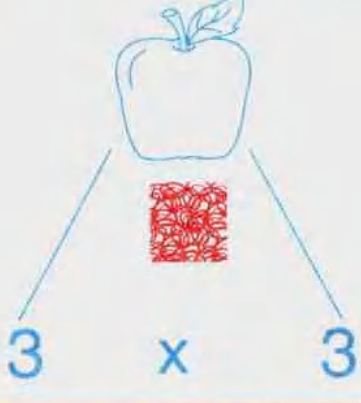
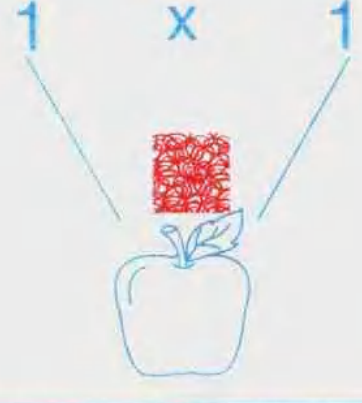
15



大象是用嘴还是用鼻子来喝水?



用口诀算出答案,然后填在苹果上。

 <p>3 x 2</p>	 <p>2 x 3</p>
 <p>2 x 2</p>	 <p>1 x 3</p>
 <p>3 x 3</p>	 <p>1 x 1</p>

你能又快又好的把答案写出来吗?

$$\begin{array}{r} 6 \\ \times 3 \\ \hline \square \\ \text{■} \end{array}$$

$$\begin{array}{r} 2 \\ \times 3 \\ \hline \square \\ \text{■} \end{array}$$

$2 \times 9 = \square \text{ ■}$

$3 \times 8 = \square \text{ ■}$

$3 \times 9 = \square \text{ ■}$

$2 \times 4 = \square \text{ ■}$

$4 \times 7 = \square \text{ ■}$

$2 \times 6 = \square \text{ ■}$

$$\begin{array}{r} 8 \\ \times 2 \\ \hline \square \\ \text{■} \end{array}$$

$$\begin{array}{r} 2 \\ \times 2 \\ \hline \square \\ \text{■} \end{array}$$

小知识

$$\begin{array}{r} 4 \\ \times 3 \\ \hline \square \\ \text{■} \end{array}$$

$$\begin{array}{r} 7 \\ \times 3 \\ \hline \square \\ \text{■} \end{array}$$



北极熊为什么不怕冷?



按照例题,把答案写在相应的空格里。

1 2
7
3 x 2 =
9
5

2
8
4 x 2 =
10
6

1
7
3 x 3 =
9
5

2
8
4 x 3 =
10
6

算一算,做完这几道题,一共用了几分钟?

$$\begin{array}{r} 8 \\ \times 4 \\ \hline \square \\ \square \end{array}$$

$$\begin{array}{r} 2 \\ \times 5 \\ \hline \square \\ \square \end{array}$$

$4 \times 4 = \square$ 

$5 \times 8 = \square$ 

$5 \times 6 = \square$ 

$5 \times 5 = \square$ 

$3 \times 7 = \square$ 

$6 \times 6 = \square$ 

$$\begin{array}{r} 5 \\ \times 4 \\ \hline \square \\ \square \end{array}$$

$$\begin{array}{r} 7 \\ \times 5 \\ \hline \square \\ \square \end{array}$$

小知识

$$\begin{array}{r} 3 \\ \times 5 \\ \hline \square \\ \square \end{array}$$

$$\begin{array}{r} 2 \\ \times 4 \\ \hline \square \\ \square \end{array}$$



斑马身上的斑纹有什么作用?




比一比,想一想,算出答案,写在空格里。



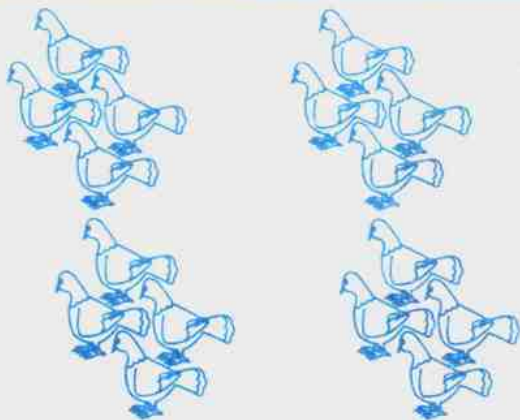
$$4 + 4 = \square$$

$$4 \times 2 = \square$$



$$4 + 4 + 4 = \square$$

$$4 \times 3 = \square$$



$$4 + 4 + 4 + 4 = \square$$

$$4 \times 4 = \square$$

$$\begin{array}{r} 4 \\ \times 2 \\ \hline \end{array}$$

$$\square$$

$$\begin{array}{r} 4 \\ \times 3 \\ \hline \end{array}$$

$$\square$$

$$\begin{array}{r} 4 \\ \times 4 \\ \hline \end{array}$$

$$\square$$

乘一乘,看谁算得又快又好。

$$\begin{array}{r} 4 \\ \times 7 \\ \hline \square \\ \text{[Red Pattern]} \end{array}$$

$$\begin{array}{r} 4 \\ \times 5 \\ \hline \square \\ \text{[Red Pattern]} \end{array}$$

$3 \times 5 = \square \text{ [Red Pattern]}$

$6 \times 8 = \square \text{ [Red Pattern]}$

$9 \times 4 = \square \text{ [Red Pattern]}$

$6 \times 7 = \square \text{ [Red Pattern]}$

$2 \times 7 = \square \text{ [Red Pattern]}$

$8 \times 3 = \square \text{ [Red Pattern]}$

$$\begin{array}{r} 5 \\ \times 6 \\ \hline \square \\ \text{[Red Pattern]} \end{array}$$

$$\begin{array}{r} 9 \\ \times 5 \\ \hline \square \\ \text{[Red Pattern]} \end{array}$$

小知识

$$\begin{array}{r} 8 \\ \times 4 \\ \hline \square \\ \text{[Red Pattern]} \end{array}$$


$$\begin{array}{r} 8 \\ \times 5 \\ \hline \square \\ \text{[Red Pattern]} \end{array}$$



七星瓢虫是益虫还是害虫?




比一比,想一想,算出答案




$$5 + 5 = \square$$

$$5 \times 2 = \square$$



$$5 + 5 + 5 = \square$$

$$5 \times 3 = \square$$



$$5 + 5 + 5 + 5 = \square$$

$$5 \times 4 = \square$$

$$\begin{array}{r} 5 \\ \times 2 \\ \hline \end{array}$$

$$\square$$

$$\begin{array}{r} 5 \\ \times 3 \\ \hline \end{array}$$

$$\square$$

$$\begin{array}{r} 5 \\ \times 4 \\ \hline \end{array}$$

$$\square$$

想一想, 空格里应该是几?

$$\begin{array}{r} 3 \\ \times \square \\ \hline 15 \end{array}$$

$$\begin{array}{r} 4 \\ \times \square \\ \hline 16 \end{array}$$

$$9 \times \square = 27$$

$$6 \times \square = 18$$

$$\begin{array}{r} 2 \\ \times \square \\ \hline 12 \end{array}$$

$$\begin{array}{r} 3 \\ \times \square \\ \hline 18 \end{array}$$

$$5 \times \square = 20$$

$$7 \times \square = 14$$

$$\begin{array}{r} 3 \\ \times \square \\ \hline 9 \end{array}$$

$$\begin{array}{r} 2 \\ \times \square \\ \hline 8 \end{array}$$

$$\begin{array}{r} 3 \\ \times \square \\ \hline 21 \end{array}$$

$$\begin{array}{r} 8 \\ \times \square \\ \hline 16 \end{array}$$

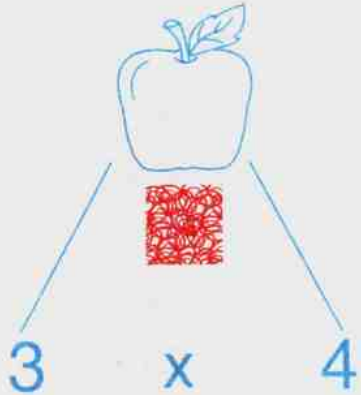
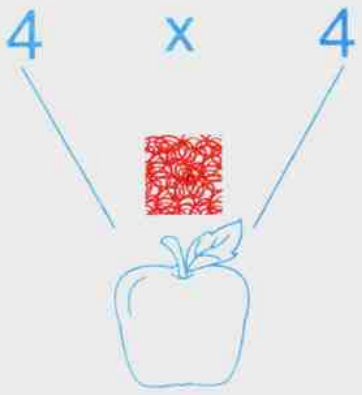
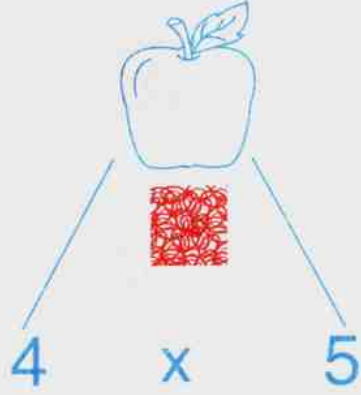
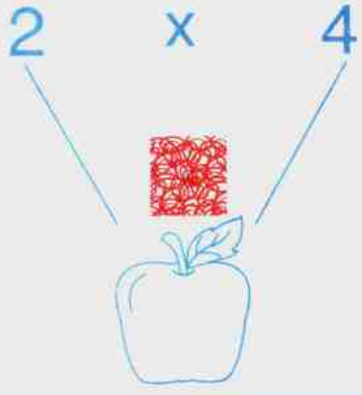
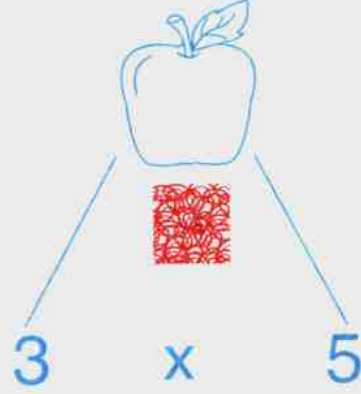
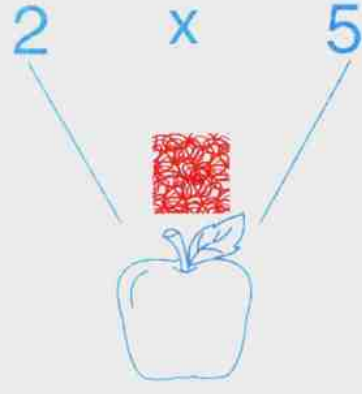
小知识



为什么说啄木鸟是大树的医生?



用口诀算出答案, 写在苹果上

 <p>3 x 4</p>	 <p>4 x 4</p>
 <p>4 x 5</p>	 <p>2 x 4</p>
 <p>3 x 5</p>	 <p>2 x 5</p>