

QUWEI JI AN FA

趣味减法

浙江少年儿童出版社



多角度智能训练

3000道减法习题

全面提升儿童思维能力和计算能力

QUWEI JIANFA

趣味减法

文：云华 史洋等

图：大米工作室

3-2=
5-6=
8-6=

江苏工业学院图书馆
藏书章



浙江少年儿童出版社

责任编辑 刘文娟
封面设计 阿 恒
制 作 MY·工作空间

趣味减法

浙江少年儿童出版社出版发行 杭新印务有限公司印刷

全国各地新华书店经销

开本 787×1092 1/16 印张 4.5 印数 1—15200

2005年7月第1版 2005年7月第1次印刷

ISBN 7—5342—3587—1/G·1848 定 价：7.00 元

(如有印装质量问题，影响阅读，请与承印厂联系调换)

考考你

树上有5只小鸟，飞走了2只，
还剩几只？



$2 - 1 =$

$6 - 1 =$

$4 - 1 =$

$3 - 1 =$

$4 - 1 =$

$5 - 1 =$

$5 - 1 =$

$8 - 1 =$

$8 - 1 =$

$7 - 1 =$

$5 - 1 =$

$6 - 1 =$

$4 - 1 =$

$3 - 1 =$

$3 - 1 =$

$6 - 1 =$

$7 - 1 =$

$2 - 1 =$

$9 - 1 =$

$2 - 1 =$

$7 - 1 =$

$8 - 1 =$

$9 - 1 =$

$9 - 1 =$

$5 - 1 =$

$4 - 1 =$

$5 - 1 =$

$7 - 1 =$

$6 - 1 =$

$4 - 1 =$

$4 - 1 =$

$3 - 1 =$

$8 - 1 =$

$6 - 1 =$

$2 - 1 =$

$2 - 1 =$

$3 - 1 =$

$7 - 1 =$

$6 - 1 =$

$2 - 1 =$

$8 - 1 =$

$7 - 1 =$


$8 - 1 =$

$9 - 1 =$

$3 - 1 =$

考考你

想一想，每只小动物原来有多少食物，它吃掉了多少？算一算，还剩下多少？



$3 - 2 =$

$4 - 2 =$

$8 - 2 =$

$2 - 2 =$

$7 - 2 =$

$3 - 2 =$

$8 - 2 =$

$5 - 2 =$

$7 - 2 =$

$6 - 2 =$

$9 - 2 =$

$4 - 2 =$

$7 - 2 =$

$6 - 2 =$

$6 - 2 =$

$4 - 2 =$

$3 - 2 =$

$2 - 2 =$

$2 - 2 =$

$8 - 2 =$

$5 - 2 =$

$8 - 2 =$

$2 - 2 =$

$8 - 2 =$

$3 - 2 =$

$6 - 2 =$

$9 - 2 =$

$7 - 2 =$

$7 - 2 =$

$2 - 2 =$

$5 - 2 =$

$4 - 2 =$

$3 - 2 =$

$9 - 2 =$

$3 - 2 =$

$6 - 2 =$

$6 - 2 =$

$9 - 2 =$

$7 - 2 =$

$4 - 2 =$

$2 - 2 =$


$4 - 2 =$

$8 - 2 =$

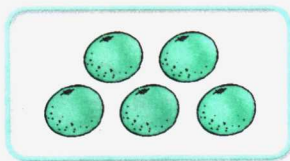
$6 - 2 =$

$8 - 2 =$


考考你

把图中的水果分成不同的两份，
有几种分法？把结果写在□中。

□	□
□	□
□	□



□	□
□	□
□	□



□	□
□	□
□	□

$7 - 3 =$

$5 - 3 =$

$3 - 3 =$

$4 - 3 =$

$9 - 3 =$

$6 - 3 =$

$8 - 3 =$

$7 - 3 =$

$9 - 3 =$

$5 - 3 =$

$4 - 3 =$

$8 - 3 =$

$7 - 3 =$

$6 - 3 =$

$5 - 3 =$

$3 - 3 =$

$8 - 3 =$

$4 - 3 =$

$9 - 3 =$

$3 - 3 =$

$7 - 3 =$

$6 - 3 =$

$9 - 3 =$

$6 - 3 =$

$7 - 3 =$

$7 - 3 =$

$9 - 3 =$

$8 - 3 =$

$5 - 3 =$

$8 - 3 =$

$5 - 3 =$

$4 - 3 =$

$3 - 3 =$

$3 - 3 =$

$6 - 3 =$

$5 - 3 =$

$6 - 3 =$

$8 - 3 =$

$6 - 3 =$

$7 - 3 =$

$7 - 3 =$

$7 - 3 =$


$4 - 3 =$

$9 - 3 =$

$4 - 3 =$

考考你

算一算，下面两组图形的数量相减，
差是多少？把正确的数字写在□中。



$5 - 4 =$

$8 - 4 =$

$4 - 4 =$

$7 - 4 =$

$6 - 4 =$

$7 - 4 =$

$9 - 4 =$

$4 - 4 =$

$5 - 4 =$

$8 - 4 =$

$5 - 4 =$

$9 - 4 =$

$6 - 4 =$

$7 - 4 =$

$8 - 4 =$

$4 - 4 =$

$9 - 4 =$

$7 - 4 =$

$5 - 4 =$

$6 - 4 =$

$6 - 4 =$

$9 - 4 =$

$7 - 4 =$

$4 - 4 =$

$7 - 4 =$

$8 - 4 =$

$8 - 4 =$

$6 - 4 =$

$5 - 4 =$

$5 - 4 =$

$8 - 4 =$

$4 - 4 =$

$7 - 4 =$

$5 - 4 =$

$7 - 4 =$

$8 - 4 =$

$4 - 4 =$

$9 - 4 =$

$6 - 4 =$

$7 - 4 =$

$8 - 4 =$

$9 - 4 =$

$9 - 4 =$

$6 - 4 =$

$5 - 4 =$

考考你


算一算，前面的动物数量减去后面的动物数量，差是多少？把正确的数字写在□中。




-



= □



-



= □

$6 - 5 =$

$9 - 5 =$

$5 - 5 =$

$7 - 5 =$

$8 - 5 =$

$6 - 5 =$

$5 - 5 =$

$7 - 5 =$

$7 - 5 =$

$8 - 5 =$

$6 - 5 =$

$8 - 5 =$

$9 - 5 =$

$5 - 5 =$

$9 - 5 =$

$6 - 5 =$

$8 - 5 =$

$6 - 5 =$

$7 - 5 =$

$7 - 5 =$

$7 - 5 =$

$5 - 5 =$

$9 - 5 =$

$8 - 5 =$

$8 - 5 =$

$6 - 5 =$

$5 - 5 =$

$9 - 5 =$

$5 - 5 =$

$9 - 5 =$

$6 - 5 =$

$7 - 5 =$

$6 - 5 =$

$7 - 5 =$

$8 - 5 =$

$7 - 5 =$

$8 - 5 =$

$9 - 5 =$

$8 - 5 =$

$5 - 5 =$

$6 - 5 =$

$9 - 5 =$


$9 - 5 =$

$7 - 5 =$



$6 - 5 =$

考考你

算一算，拿走了一部分，还剩下多少？把答案写在□中。



$6 - 2 = \square$



$9 - 4 = \square$

$5 - 3 = 2$

$\square - 3 = 5$

$\square - 4 = 0$

$7 - 6 = 1$

$\square - 1 = 8$

$\square - 3 = 2$

$4 - 4 = 0$

$\square - 2 = 5$

$\square - 6 = 1$

$\square - 5 = 3$

$\square - 3 = 3$

$\square - 4 = 2$

$\square - 2 = 4$

$\square - 1 = 2$

$\square - 5 = 3$

$\square - 2 = 7$

$\square - 2 = 7$

$\square - 2 = 7$

$\square - 5 = 2$

$\square - 5 = 2$

$\square - 1 = 8$

$\square - 4 = 2$

$\square - 4 = 2$

$\square - 2 = 5$

$\square - 5 = 4$

$\square - 3 = 4$

$\square - 3 = 3$

$\square - 1 = 7$

$\square - 3 = 5$

$\square - 3 = 5$

$\square - 2 = 5$

$\square - 2 = 4$

$\square - 4 = 3$

$\square - 5 = 1$

$\square - 4 = 2$

$\square - 2 = 5$

$\square - 1 = 6$

$\square - 1 = 6$

$\square - 5 = 1$

$\square - 4 = 3$

$\square - 3 = 2$

$\square - 1 = 6$

$\square - 1 = 2$

$\square - 5 = 3$

$\square - 3 = 6$

考考你

数一数，有几只小兔，几根胡萝卜？每只小兔分一根胡萝卜，还差几根胡萝卜？



$3 - \square = 1$

$9 - \square = 5$

$5 - \square = 4$

$5 - \square = 4$

$8 - \square = 6$

$6 - \square = 3$

$6 - \square = 2$

$7 - \square = 4$

$7 - \square = 2$

$9 - \square = 6$

$6 - \square = 2$

$8 - \square = 5$

$5 - \square = 3$

$5 - \square = 3$

$9 - \square = 6$

$9 - \square = 5$

$8 - \square = 5$

$6 - \square = 1$

$8 - \square = 6$

$5 - \square = 2$

$5 - \square = 3$

$7 - \square = 4$

$6 - \square = 4$

$8 - \square = 2$

$6 - \square = 3$

$7 - \square = 3$

$7 - \square = 4$

$4 - \square = 2$

$9 - \square = 8$

$6 - \square = 5$

$5 - \square = 2$

$5 - \square = 3$

$4 - \square = 2$

$9 - \square = 8$

$4 - \square = 2$

$5 - \square = 1$

$7 - \square = 3$

$8 - \square = 6$

$6 - \square = 2$

$6 - \square = 4$

$6 - \square = 1$

$9 - \square = 4$

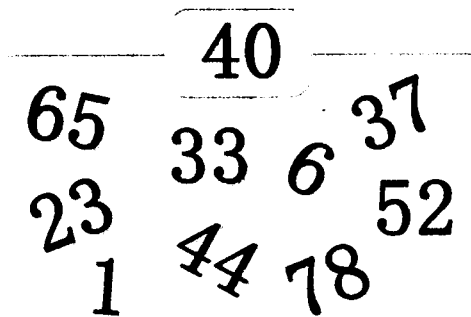

$5 - \square = 3$

$7 - \square = 2$

$8 - \square = 6$



想一想，哪个数字大，哪个数字小？把比小框里的数字大的数圈出来。



□ - 6 = 0

□ - 7 = 1

□ - 4 = 3

□ - 3 = 2

□ - 1 = 7

□ - 1 = 6

□ - 2 = 7

□ - 7 = 1

□ - 5 = 3

□ - 6 = 1

□ - 8 = 1

□ - 5 = 0

□ - 3 = 5

□ - 4 = 3

□ - 6 = 3

□ - 3 = 6

□ - 2 = 5

□ - 1 = 8

□ - 4 = 4

□ - 5 = 1

□ - 8 = 1

□ - 3 = 5

□ - 4 = 3

□ - 6 = 3

□ - 2 = 7

□ - 7 = 1

□ - 5 = 3

□ - 6 = 1

□ - 1 = 6

□ - 5 = 2

□ - 1 = 5

□ - 2 = 3

□ - 4 = 2

□ - 7 = 2

□ - 6 = 0

□ - 3 = 6

□ - 2 = 4

□ - 1 = 7

□ - 4 = 4

□ - 5 = 2

□ - 5 = 3

□ - 8 = 1


□ - 3 = 5

□ - 4 = 2

□ - 6 = 3

考考你

找一找，图中的哪个图形和虚线圈起来的图形是相同的，用笔圈出来。



$$\square - 1 = 3$$

$$\square - 3 = 5$$

$$\square - 3 = 4$$

$$\square - 2 = 3$$

$$\square - 6 = 2$$

$$\square - 5 = 1$$

$$\square - 3 = 3$$

$$\square - 2 = 7$$

$$\square - 8 = 1$$

$$\square - 4 = 4$$

$$\square - 1 = 8$$

$$\square - 1 = 7$$

$$\square - 5 = 2$$

$$\square - 5 = 2$$

$$\square - 6 = 3$$

$$\square - 6 = 2$$

$$\square - 4 = 4$$

$$\square - 4 = 2$$

$$\square - 7 = 1$$

$$\square - 3 = 1$$

$$\square - 5 = 3$$

$$\square - 8 = 0$$

$$\square - 2 = 3$$

$$\square - 6 = 2$$

$$\square - 3 = 6$$

$$\square - 1 = 3$$

$$\square - 7 = 1$$

$$\square - 2 = 7$$

$$\square - 6 = 2$$

$$\square - 2 = 4$$

$$\square - 4 = 3$$

$$\square - 7 = 1$$

$$\square - 1 = 6$$

$$\square - 5 = 4$$

$$\square - 8 = 0$$

$$\square - 3 = 3$$

$$\square - 7 = 1$$

$$\square - 3 = 6$$

$$\square - 8 = 0$$

$$\square - 2 = 3$$

$$\square - 2 = 7$$

$$\square - 6 = 1$$



$$\square - 1 = 6$$

$$\square - 4 = 3$$

$$\square - 2 = 5$$

考考你

数数看，哪边动物的数量少，在相应的□中打√。



$\square - 2 = 7$

$\square - 1 = 5$

$\square - 4 = 2$

$\square - 1 = 3$

$\square - 3 = 6$

$\square - 5 = 2$

$\square - 3 = 4$

$\square - 6 = 2$

$\square - 2 = 3$

$\square - 4 = 5$

$\square - 3 = 3$

$\square - 3 = 5$

$\square - 5 = 2$

$\square - 2 = 5$

$\square - 7 = 2$

$\square - 6 = 0$

$\square - 6 = 3$

$\square - 1 = 3$

$\square - 5 = 2$

$\square - 4 = 1$

$\square - 3 = 6$

$\square - 2 = 4$

$\square - 1 = 7$

$\square - 6 = 2$

$\square - 3 = 5$

$\square - 8 = 0$

$\square - 4 = 5$

$\square - 7 = 2$

$\square - 3 = 2$

$\square - 2 = 5$

$\square - 6 = 3$

$\square - 4 = 1$

$\square - 7 = 1$

$\square - 8 = 0$

$\square - 5 = 2$

$\square - 8 = 0$

$\square - 3 = 2$

$\square - 6 = 0$

$\square - 3 = 2$

$\square - 4 = 1$

$\square - 3 = 5$

$\square - 4 = 1$

$\square - 1 = 7$

$\square - 1 = 3$

$\square - 5 = 3$

考考你

请你记住每个小动物的代号，将正确的数字写在□中。



2



1



6



3



5



4













$8 - \square = 7$

$4 - \square = 1$

$3 - \square = 2$

$4 - \square = 2$

$5 - \square = 4$

$5 - \square = 0$

$9 - \square = 6$

$6 - \square = 2$

$7 - \square = 4$

$5 - \square = 3$

$9 - \square = 5$

$4 - \square = 2$

$8 - \square = 4$

$7 - \square = 3$

$8 - \square = 6$

$9 - \square = 1$

$5 - \square = 0$

$9 - \square = 1$

$4 - \square = 3$

$4 - \square = 2$

$4 - \square = 2$

$7 - \square = 5$

$8 - \square = 5$

$7 - \square = 5$

$3 - \square = 0$

$5 - \square = 3$

$3 - \square = 0$

$2 - \square = 1$

$7 - \square = 5$

$5 - \square = 3$

$8 - \square = 6$

$3 - \square = 0$

$9 - \square = 5$

$6 - \square = 2$

$6 - \square = 2$

$6 - \square = 2$

$5 - \square = 0$

$9 - \square = 5$

$8 - \square = 7$

$7 - \square = 3$

$8 - \square = 2$

$4 - \square = 1$

$9 - \square = 5$

$4 - \square = 1$

$7 - \square = 4$

考考你

请你试着画一画，算一算，将答案写出来。



$$8 - 4 = 4$$



$$6 - 2 =$$



$$7 - 3 =$$



$$5 - 4 =$$

$$7 - \square = 3$$

$$3 - \square = 2$$

$$5 - \square = 2$$

$$4 - \square = 1$$

$$6 - \square = 4$$

$$3 - \square = 1$$

$$3 - \square = 0$$

$$8 - \square = 5$$

$$4 - \square = 2$$

$$6 - \square = 1$$

$$9 - \square = 4$$

$$9 - \square = 3$$

$$7 - \square = 4$$

$$7 - \square = 3$$

$$5 - \square = 4$$

$$9 - \square = 2$$

$$5 - \square = 1$$

$$8 - \square = 2$$

$$5 - \square = 1$$

$$4 - \square = 0$$

$$7 - \square = 3$$

$$4 - \square = 0$$

$$3 - \square = 2$$

$$4 - \square = 1$$

$$3 - \square = 2$$

$$9 - \square = 3$$

$$3 - \square = 0$$

$$9 - \square = 3$$

$$5 - \square = 4$$

$$6 - \square = 1$$

$$5 - \square = 4$$

$$6 - \square = 1$$

$$5 - \square = 3$$

$$7 - \square = 5$$

$$3 - \square = 0$$

$$9 - \square = 6$$

$$6 - \square = 3$$

$$8 - \square = 4$$

$$8 - \square = 3$$

$$8 - \square = 2$$

$$4 - \square = 2$$

$$7 - \square = 2$$


$$9 - \square = 5$$

$$5 - \square = 1$$

$$6 - \square = 3$$


考考你

计算下列各题，说说算式中各数表示什么？




$$3 - 1 = \square$$

$$3 - 2 = \square$$



$$4 - 1 = \square$$

$$4 - 3 = \square$$



$$5 - 3 = \square$$

$$5 - 2 = \square$$

$$4 - \square = 2$$

$$8 - \square = 4$$

$$6 - \square = 3$$

$$7 - \square = 5$$

$$5 - \square = 2$$

$$4 - \square = 1$$

$$9 - \square = 7$$

$$2 - \square = 1$$

$$3 - \square = 2$$

$$5 - \square = 4$$

$$6 - \square = 5$$

$$7 - \square = 6$$

$$8 - \square = 5$$

$$9 - \square = 3$$

$$4 - \square = 2$$

$$5 - \square = 4$$

$$6 - \square = 2$$

$$4 - \square = 1$$

$$7 - \square = 6$$

$$9 - \square = 5$$

$$8 - \square = 3$$

$$6 - \square = 1$$

$$5 - \square = 4$$

$$4 - \square = 1$$

$$7 - \square = 3$$

$$8 - \square = 6$$

$$3 - \square = 1$$

$$4 - \square = 2$$

$$6 - \square = 5$$

$$9 - \square = 2$$

$$6 - \square = 5$$

$$4 - \square = 3$$

$$7 - \square = 1$$

$$5 - \square = 3$$

$$8 - \square = 2$$

$$9 - \square = 5$$

$$4 - \square = 3$$

$$6 - \square = 1$$

$$7 - \square = 2$$

$$5 - \square = 1$$

$$8 - \square = 7$$

$$9 - \square = 2$$

$$4 - \square = 3$$


$$6 - \square = 4$$

$$7 - \square = 6$$

考考你

池塘里有7只青蛙，几只跳进了水里？还剩下几只？请列一道减法算式。

$$7 - \square = \square$$



$7 - \square = 5$

$4 - \square = 1$

$8 - \square = 2$

$2 - \square = 1$

$3 - \square = 2$

$6 - \square = 3$

$3 - \square = 0$

$2 - \square = 1$

$5 - \square = 1$

$4 - \square = 1$

$7 - \square = 5$

$7 - \square = 2$

$5 - \square = 2$

$5 - \square = 2$

$9 - \square = 3$

$8 - \square = 2$

$7 - \square = 4$

$4 - \square = 2$

$6 - \square = 3$

$3 - \square = 1$

$6 - \square = 3$

$5 - \square = 1$

$6 - \square = 4$

$9 - \square = 5$

$7 - \square = 2$

$8 - \square = 5$

$2 - \square = 1$

$9 - \square = 3$

$5 - \square = 2$

$3 - \square = 0$

$4 - \square = 2$

$4 - \square = 2$

$7 - \square = 5$

$6 - \square = 3$

$6 - \square = 3$

$5 - \square = 2$

$9 - \square = 5$

$9 - \square = 5$

$6 - \square = 3$

$5 - \square = 1$

$3 - \square = 1$

$8 - \square = 4$

$3 - \square = 2$

$7 - \square = 3$

$9 - \square = 3$