

# ESSENTIAL GEOMETRY

Harry L. Baldwin, Jr.

San Diego City College

**McGraw-Hill, Inc.**

New York St. Louis San Francisco Auckland Bogotá  
Caracas Lisbon London Madrid Mexico City Milan  
Montreal New Delhi San Juan Singapore  
Sydney Tokyo Toronto



This book is printed on recycled paper containing a minimum of 50% total recycled fiber with 10% postconsumer de-inked fiber.

## **ESSENTIAL GEOMETRY**

Copyright © 1993 by McGraw-Hill, Inc. All rights reserved.  
Printed in the United States of America. Except as permitted under the  
United States Copyright Act of 1976, no part of this publication may be  
reproduced or distributed in any form or by any means, or stored in a data  
base or retrieval system, without the prior written permission of the publisher.

10 11 12 13 MAL MAL 06 05 04 03

ISBN 0-07-004537-2

The editor was Michael Johnson;  
the production supervisor was Denise L. Puryear.  
Malloy Lithographing, Inc., was printer and binder.

### **Library of Congress Cataloging-in-Publication Data**

Baldwin, Harry L.

Essential geometry / Harry L. Baldwin, Jr.

p. cm.

Includes index.

ISBN 0-07-004537-2 (text)—ISBN 0-07-004538-0 (instructor's manual)

I. Geometry. I. Title.

QA445.B315 1993

516—dc20

92-18140

# ESSENTIAL GEOMETRY

## CONTENTS

Chapter 1.	<b>Length</b> . . . . .	1
	Geometric figures, units of length, geometric drawings.	
Chapter 2.	<b>Angles and Their Measures</b> . . . . .	15
	Naming angles, measures of angles, estimating the measure of an angle.	
Chapter 3.	<b>Angles Formed by Intersecting Lines</b> . . . . .	27
	Two intersecting lines, three lines on a plane, two parallel lines intersected by a transversal, three intersecting lines that form a triangle.	
Chapter 4.	<b>Polygons</b> . . . . .	39
	Vocabulary of polygons, triangles, quadrilaterals, congruent triangles, constructing triangles.	
Chapter 5.	<b>Area</b> . . . . .	59
	Units of area, areas of polygons: square, rectangle, parallelogram, triangle, trapezoid.	
Chapter 6.	<b>Circles</b> . . . . .	73
	Dimensions of a circle, area of a circle, subtended angles.	
Chapter 7.	<b>Similar Geometric Figures</b> . . . . .	85
	Congruency and similarity, similar triangles.	
Chapter 8.	<b>The Pythagorean Theorem and Special Right Triangles</b> . . . . .	99
	The Pythagorean theorem, the 45-degree right triangles, the 30°-60° right triangles.	
Chapter 9.	<b>Volume</b> . . . . .	113
	Four types of geometric figures, the volumes of some solids: cube, rectangular solid, cylinder, pyramid, cone, sphere.	
	<b>Index</b> . . . . .	133
	<b>Summary of Important Formulas</b> . . . . .	inside back cover

# Chapter 1

## Length

### Geometric Figures

A **plane** is a flat surface. No surface in nature, under microscopic examination, would be found to be perfectly flat, but we can imagine the existence of such an ideal surface, and we can use our paper or chalkboard as a representation of that surface. On our plane we can mark a location: a **point**. The mark we make, although small, is not really a point, for a true point has no size at all. Our mark, therefore, is merely a representation (a “picture”) of a point.

The entire plane consists of an infinite number of points. Any collection or grouping of these points is called a **geometric figure**. A point is the most elementary or fundamental geometric figure. We can “draw a picture” of a point by making a small dot on our paper, or chalkboard, or whatever we are using to represent the plane that contains the point. To identify a point in a drawing, or when talking or writing about the point, it is often best if the point is given a name. Here we will follow the customary practice of using capital letters to name points.

Imagine that we take a “perfect pencil” (one whose tip is a true “point”) and move it along our plane, causing it to leave a mark as it moves. Every location on that mark is a point, and this collection of points is another type of geometric figure: a **curve**. If, as we moved the pencil, we never changed the direction of motion, then the mark made would be a representation of part of a **straight line** (or just **line**). The entire straight line extends forever in opposite directions, but since our representation of the plane is limited (our paper or chalkboard is of finite size) we can draw a picture of only part of the line. In discussions and drawings, lines are often named with lowercase letters, usually near the middle of the alphabet, such as  $k$ ,  $l$ , or  $m$ . Sometimes we will name, or “label”, a line by using a letter together with a “subscript”—a small symbol (usually a number) written to the lower right of the letter. In such a case, the letter and its subscript (for example,  $j_2$ , which can be spoken “jay sub two”) form the name of the line.

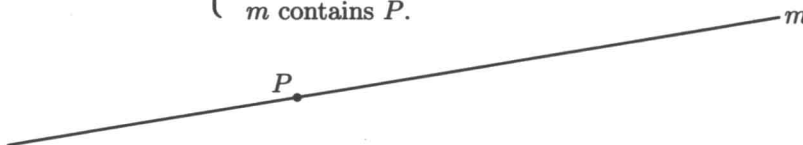
Applications of geometry involve only parts of lines rather than entire lines. A **line segment** consists of two points on a line (these points are the “endpoints” of the segment) together with all points of the line that lie between the endpoints. A line segment is named by listing the letter-names of its endpoints, in either order.

The points, lines, and line segments in Figures 1.1 through 1.4 of the examples below are referred to in statements that accompany the figures. Some of these statements have been grouped; within a grouping, the statements are “equivalent”, which means that they give the same information, even though they are worded differently.

1.

Equivalent statements:  $\left\{ \begin{array}{l} \text{The point named } P \text{ lies on the line named } m. \\ P \text{ lies on } m. \\ m \text{ contains } P. \end{array} \right.$

Figure 1.1



2.

Equivalent statements:  $\left\{ \begin{array}{l} \text{Points } Q \text{ and } R \text{ lie on line } n. \\ Q \text{ and } R \text{ lie on } n. \\ n \text{ contains } Q \text{ and } R. \\ \text{Line segment } QR \text{ lies on line } n. \\ QR \text{ is a segment of } n. \\ n \text{ contains } QR. \\ n \text{ contains } RQ. \end{array} \right.$

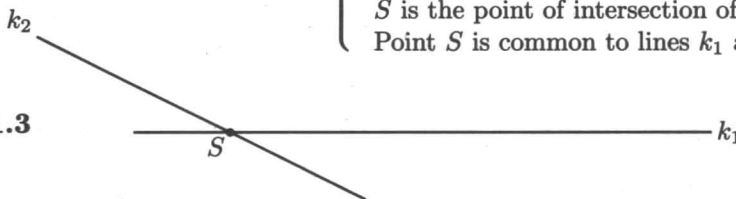
Figure 1.2



3.

Equivalent statements:  $\left\{ \begin{array}{l} \text{Point } S \text{ lies on line } k_1, \text{ and point } S \text{ lies on line } k_2. \\ k_1 \text{ and } k_2 \text{ each contains } S. \\ k_1 \text{ and } k_2 \text{ intersect at } S. \\ S \text{ is the point of intersection of lines } k_1 \text{ and } k_2. \\ \text{Point } S \text{ is common to lines } k_1 \text{ and } k_2. \end{array} \right.$

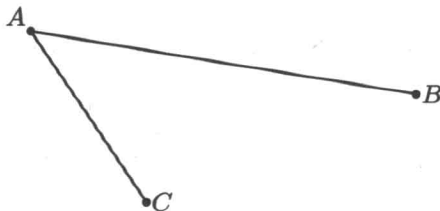
Figure 1.3



4.

Equivalent statements:  $\left\{ \begin{array}{l} \text{Points } A \text{ and } B \text{ are the endpoints of line segment } AB. \\ A \text{ and } B \text{ are the endpoints of } AB. \\ AB \text{ is a line segment.} \\ BA \text{ is a line segment.} \end{array} \right.$

Figure 1.4



Equivalent statements:  $\left\{ \begin{array}{l} AB \text{ and } AC \text{ are line segments that intersect at } A. \\ A \text{ is an endpoint of line segments } AB \text{ and } AC. \end{array} \right.$

Two points “determine” (or “define”) a line. This means that there is only one line that contains a given pair of points. In the same way, two points determine a single line segment. Sometimes a drawing may show a pair of points, but not show the line (or the line segment) that is defined by that pair of points. Often it is helpful to draw a picture of the line (or segment) determined by the points. As an example, consider points  $X$ ,  $Y$ , and  $Z$  which are shown in Figure 1.5a. We may alter the drawing to show the line that contains  $X$  and  $Y$ , or to show the segments  $XZ$  and  $YZ$ . The result of such alterations is shown in Figure 1.5b. (Of course, there are many other ways that the drawing could be altered.)

Figure 1.5a

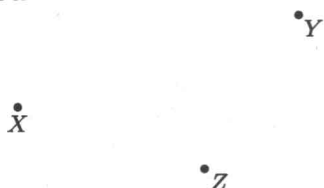
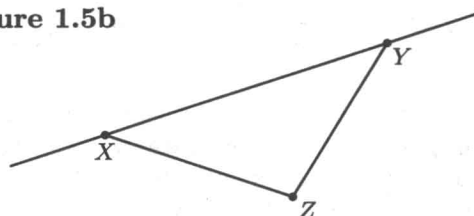


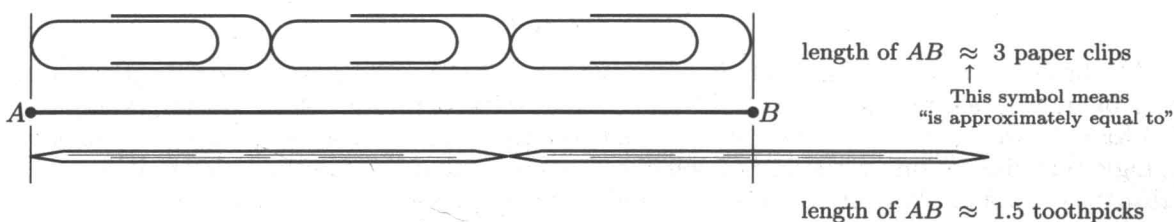
Figure 1.5b



## Units of Length

The **measure of a line segment** is its **length**, which is the distance between the endpoints of the segment. A length is described by giving a number together with some word that tells what “unit of length” is being used. Consider, for example, segment  $AB$  in Figure 1.6. Suppose paper clips are placed alongside  $AB$ , and it is found that three of these paper clips placed end-to-end span about the same distance as does the segment  $AB$ . We could then describe the length of  $AB$  as being “about 3 paper clips”, and anyone who is familiar with those paper clips can visualize the length of the segment. In a similar way,  $AB$  could be compared with toothpicks: the length of  $AB$  is somewhere between the length of one and two toothpicks; by mentally dividing a toothpick into halves, we might estimate the length of  $AB$  as being “about 1.5 toothpicks”.

Figure 1.6



A disadvantage of using paper clips and toothpicks as units of length is that these objects come in different sizes, and there has been no agreement on just which brand of paper clip or toothpick is the “standard”. In the same way, a “step” (or “pace”) and a “city block” are informal units that are useful when describing larger distances, but there is no universal agreement on the exact lengths described by such units. There are, however, many units of length that are widely accepted and used throughout the world; any such unit is referred to as a **standard unit** of length.

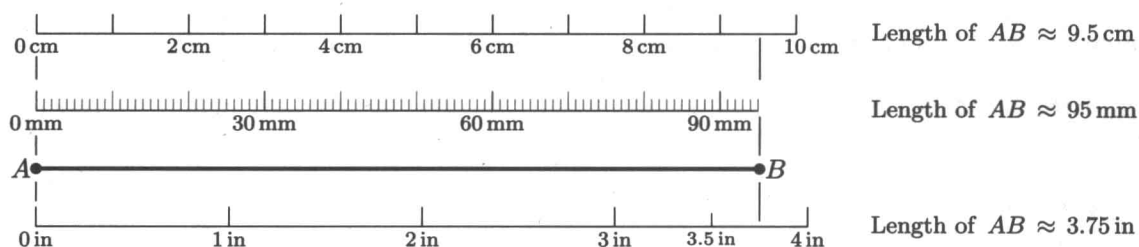
Each of the more-commonly-used standard units of length is a member of one of two “systems of measurement”: the “metric system”, or the “British system”. Although the metric system is easier to use mathematically, the British system is firmly entrenched in the United States, and efforts to replace it with the metric system have not yet been successful. Familiarity with both systems is essential, for an application problem may involve units of length from either or both systems. Shown at the top of the next page are some units of length (and the abbreviations) that are commonly seen in everyday applications (and that are used in problems in this book).

Metric System	
units	abbreviation
kilometers	km
meters	m
centimeters	cm
millimeters	mm

British System	
units	abbreviation
miles	mi
yards	yd
feet	ft (or ')
inches	in (or ")

Which unit of length is most convenient to use depends on the distance that is to be measured. Large distances (such as the distances between cities) are usually given using miles or kilometers. Shorter distances, such as the length and width of a room, are best described using feet, yards, or meters. Lengths less than the width of this page are usually described using inches, centimeters, or millimeters. In Figure 1.7 we again see segment  $AB$  (first seen in Figure 1.6), where its length is now described using standard units. In Figure 1.7, the unit distances are accurate, or “at full scale”. Other figures in this book may have some labeled lengths that are not at full scale, but within each drawing all lengths shown will have the proper relative size: a segment that is labeled four feet long, for example, will be twice as long as one that is labeled two feet long.

**Figure 1.7**



Algebraic expressions that include units (whether those units are units of length or any other type of units) can be manipulated just as if the units were variables. As an example, just as  $3x + 5x = 8x$ , so does  $3 \text{ in} + 5 \text{ in} = 8 \text{ in}$ . In contrast, the expression  $4x + 7y$  cannot be replaced with a single term unless one variable can somehow be eliminated. If, say, we know that  $x = 5y$ , then a substitution would allow us to obtain an equivalent expression that involves only the variable  $y$ :

$$\text{Since } x = 5y, \text{ then } 4x + 7y = 4(5y) + 7y = 20y + 7y = 27y.$$

In a like manner, a sum of lengths involving two different units can be expressed in terms of a single unit if we know a relationship between the units. For example, the sum  $5 \text{ ft} + 2 \text{ yd}$  can be expressed in feet by using the fact that  $1 \text{ yd} = 3 \text{ ft}$ . Here is the conversion:

$$5 \text{ ft} + 2 \text{ yd} = 5 \text{ ft} + 2(1 \text{ yd}) = 5 \text{ ft} + 2(3 \text{ ft}) = 5 \text{ ft} + 6 \text{ ft} = 11 \text{ ft}.$$

We also could express the sum in yards, using the fact that  $1 \text{ ft} = \frac{1}{3} \text{ yd}$ :

$$5 \text{ ft} + 2 \text{ yd} = 5(1 \text{ ft}) + 2 \text{ yd} = 5\left(\frac{1}{3} \text{ yd}\right) + 2 \text{ yd} = \frac{5}{3} \text{ yd} + 2 \text{ yd} = \frac{11}{3} \text{ yd} \text{ or } 3\frac{2}{3} \text{ yd}.$$

When lengths are added, it often is best if the sum is expressed using only one unit of length. With the help of one or more of the following equations, lengths can be converted between the eight units of length listed earlier on this page:

**Some  
Length-Conversion  
Equations**

Within the metric system:  $\left\{ \begin{array}{l} 1 \text{ km} = 1000 \text{ m} \\ 1 \text{ m} = 100 \text{ cm} \\ 1 \text{ cm} = 10 \text{ mm} \end{array} \right.$

Within the British system:  $\left\{ \begin{array}{l} 1 \text{ mi} = 5280 \text{ ft} \\ 1 \text{ yd} = 3 \text{ ft} \\ 1 \text{ ft} = 12 \text{ in} \end{array} \right.$

A conversion between the British and metric systems:  $1 \text{ in} = 2.54 \text{ cm}$

Any “conversion equation”, such as those above, can be replaced with an equivalent equation that has one side equal to the number 1. This can always be done in two ways. As an example,

the equation  $1 \text{ ft} = 12 \text{ in}$  is equivalent to  $\frac{1 \text{ ft}}{12 \text{ in}} = 1$  or  $\frac{12 \text{ in}}{1 \text{ ft}} = 1$ .

These two ways of writing the relationship between different units of length allow us to express a length using whatever units we desire. For example, suppose we wished to convert a length of 4 centimeters into inches. We begin by writing the equation

$$4 \text{ cm} = 4 \text{ cm}.$$

We next multiply the right side of the equation by an expression which is equivalent to 1, choosing an expression that will enable the centimeters units (cm), which we don't want, to cancel and leave inches units (in), which we do want. The fraction  $\frac{1 \text{ in}}{2.54 \text{ cm}}$  is such an expression:

$$4 \text{ cm} = 4 \text{ cm} \cdot \frac{1 \text{ in}}{2.54 \text{ cm}} = \frac{4 \cancel{\text{cm}} \cdot 1 \text{ in}}{2.54 \cancel{\text{cm}}} \approx 1.57480315 \text{ in}.$$

The division was done with a calculator—a helpful tool for such problems. The approximation symbol ( $\approx$ ) was used because the division did not give an exact value, although the 9-digit number given by my calculator certainly is close to the true value. Your calculator might give more, or perhaps fewer, than 9 digits, but your value also will be very near to the exact value. Roughly speaking, the “precision” of a decimal numeral refers to the number of digits that appear to the right of the decimal point. Since the precision in the above answer is perhaps excessive (a number that shows many digits is not easy to read or visualize), we will “round” our answer to some selected precision. In this case, let’s round the answer to the nearest thousandth, or three digits to the right of the decimal point. To do this rounding we will follow the same procedure that is built into many calculators: We begin by discarding all digits to the right of the location corresponding to the precision selected. (In this case our desired precision is thousandths, so we throw away all digits to the right of the 4.) If the leftmost discarded digit is 0, 1, 2, 3, or 4, then after this throwing away of digits we are through. If, however, the leftmost discarded digit is 5, 6, 7, 8, or 9 (and in this case the leftmost discarded digit is 8) then we “round up”: we increase the rightmost retained digit by 1 (here, then, we increase the 4 by 1). In this example, our final approximation would be

$$1.57480315 \text{ in} \approx 1.575 \text{ in}.$$

Here are a few comments about “rounding”:

- If the rightmost retained digit is a 9, and rounding is “up”, then increasing the 9 by 1 would give a 0, with 1 being “carried” to the next digit to the left. For example, rounding 7.2961 to the nearest hundredth (two digits to the right of the decimal point) would give 7.30.
- If, after rounding, the rightmost digit is 0 then do not omit the digit 0 from your answer. For example, in the rounding of 7.2961 to the nearest hundredth (discussed immediately above) if we omitted the 0 and reported the answer as 7.3 rather than as 7.30, a reader would believe that the precision is to the nearest tenth rather than to the nearest hundredth. The presence of the digit 0 conveys important information about the precision of the answer.



- Any mathematics problem has some numbers that are given (these are the “input” numbers), and after certain calculations one or more answers are produced (these are the “output” numbers). The precision that should be used when reporting an answer is related to the precisions and magnitudes of the input numbers. In real-world problems, the precisions of the input numbers are usually known (or can be estimated), and procedures exist that, if followed, dictate the precision of the answer. In this book, we will assume that all input numbers to a problem are accurate. Do not round the results of any intermediate calculations in a problem, but if the final answer would have an excessive number of digits, then you will be told to what decimal place that answer should be rounded.

The techniques for converting units and rounding described above will be used in the examples that follow.

1. Convert a length of 7 inches to centimeters.

We start by writing a statement that is certainly true:  $7 \text{ in} = 7 \text{ in}$ . We then work on the right side only, multiplying by 1 in such a way that the inches cancel and centimeters remain. The fraction that we should use is  $\frac{2.54 \text{ cm}}{1 \text{ in}}$ :

$$7 \text{ in} = 7 \text{ in} \cdot \frac{2.54 \text{ cm}}{1 \text{ in}} = \frac{7 \cancel{\text{ in}} \cdot 2.54 \text{ cm}}{1 \cancel{\text{ in}}} = 17.78 \text{ cm}.$$

In this conversion problem, if the input of 7 inches is exact, then, since the conversion equation  $1 \text{ in} = 2.54 \text{ cm}$  also is exact, the answer 17.78 centimeters also is exact. Since four digits in the answer is not excessive, we won't round this answer.

2. A desk is 118 centimeters long. What is the length of this desk in feet, expressed to the nearest hundredth foot?

The conversion equations listed earlier do not include one that allows us to change a length in centimeters directly into a length in feet, but by using a couple of the given conversion equations we can make the change in two steps. We first convert from centimeters into inches, and then from inches into feet. After writing  $118 \text{ cm} = 118 \text{ cm}$ , we then multiply the right side by 1 twice, each time using “a special way of writing the number 1”:

$$118 \text{ cm} = 118 \text{ cm} \cdot \frac{1 \text{ in}}{2.54 \text{ cm}} \cdot \frac{1 \text{ ft}}{12 \text{ in}} = \frac{118 \cancel{\text{ cm}} \cdot 1 \cancel{\text{ in}} \cdot 1 \text{ ft}}{2.54 \cancel{\text{ cm}} \cdot 12 \cancel{\text{ in}}} = \frac{118 \text{ ft}}{2.54 \cdot 12} \approx 3.87139108 \text{ ft} \approx 3.87 \text{ ft}.$$

Notice that the leftmost discarded digit was 1, so we made no change after discarding digits to the right of the hundredth place.

3. Suppose you need to convert many distances given in meters into distances given in inches. It would be helpful to have a conversion equation that tells how many inches equal one meter. Derive such an equation.

Since  $\frac{100 \text{ cm}}{1 \text{ m}} = 1$  and  $\frac{1 \text{ in}}{2.54 \text{ cm}} = 1$ , then

$$1 \text{ m} = 1 \text{ m} \cdot \frac{100 \text{ cm}}{1 \text{ m}} \cdot \frac{1 \text{ in}}{2.54 \text{ cm}} = \frac{1 \cancel{\text{ m}} \cdot 100 \cancel{\text{ cm}} \cdot 1 \text{ in}}{1 \cancel{\text{ m}} \cdot 2.54 \cancel{\text{ cm}}} = \frac{100 \text{ in}}{2.54} \approx 39.37007874 \text{ in}.$$

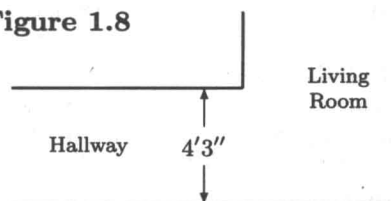
Rounding to the nearest hundredth inch yields this “approximate equation”:  $1 \text{ m} \approx 39.37 \text{ in}$ .

4. In a drawing of a house plan (part of the plan is shown in Figure 1.8 at right), a hallway is shown as having width  $4'3''$ . Convert this width into inches.

The dimension  $4'3''$  is a shorter way of writing "4 ft 3 in", which means  $4\text{ ft} + 3\text{ in}$ . We will change 4 ft into inches by multiplying by the fraction  $\frac{12\text{ in}}{1\text{ ft}}$ :

$$4'3'' = 4\text{ ft} + 3\text{ in} = 4\text{ ft} \cdot \frac{12\text{ in}}{1\text{ ft}} + 3\text{ in} = \frac{4\cancel{\text{ft}} \cdot 12\text{ in}}{1\cancel{\text{ft}}} + 3\text{ in} = 48\text{ in} + 3\text{ in} = 51\text{ in} \quad (\text{or } 51'').$$

Figure 1.8



## Geometric Drawings

No length is described completely unless both a number and the units of length are given. However, in some discussions or drawings the units are omitted. In these cases, we will assume that all distances in the discussion have the same units of length, and that the statements in the discussion are true no matter what units would be used.

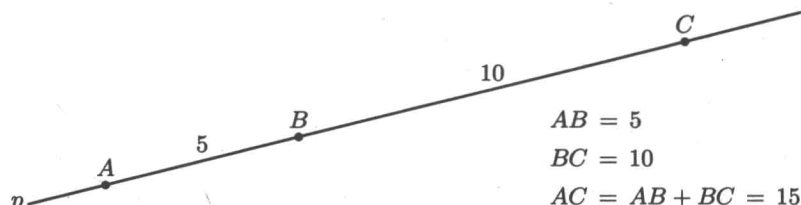
Often the length of a line segment is given using an equation, in which one side of the equation is the name of the segment, and the other side of the equation is the length of the segment. In such an equation, the name of the segment is being treated as a constant, and can be used in algebraic expressions just like any symbol that represents a constant. As an example, Figure 1.9 shows that line  $p$  contains points  $A$ ,  $B$ , and  $C$ , and that the lengths of segments  $AB$  and  $BC$  are 5 and 10 (units of length), respectively. We may write

$$AB = 5 \quad \text{and} \quad BC = 10.$$

Furthermore, since segment  $AC$  can be formed by joining segments  $AB$  and  $BC$ , we know that

$$AC = AB + BC, \quad \text{so} \quad AC = 5 + 10 \quad \text{or} \quad AC = 15.$$

Figure 1.9



(Notice that the units of length were omitted in the discussion and drawing above. The statements are true regardless of what units of length are used, so long as all lengths have the same units.)

If a problem involves the lengths of line segments, then a good way to begin is by writing, on the drawing, all known lengths. As other lengths become known, they also should be written on the drawing. A number written next to a segment is giving the length of the segment whose indicated endpoints lie near, but on opposite sides of, that number. Sometimes a brace (or other symbol) must also be used, to clearly indicate what segment a length applies to. For example, Figure 1.10a shows that  $XZ$  has length 24 and  $XY$  has length 10. From this it can be deduced that  $YZ$  has length 14, and this fact is shown on the altered drawing in Figure 1.10b. (When writing the length of a line segment on a drawing, you need not redraw the figure. Merely write the length on the existing drawing.)

Figure 1.10a

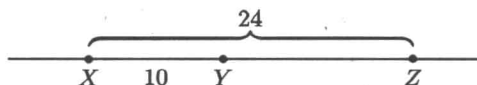
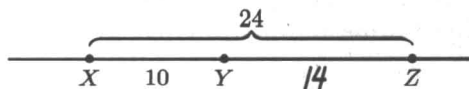
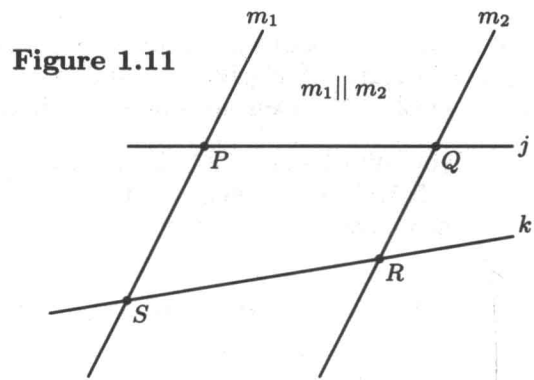


Figure 1.10b

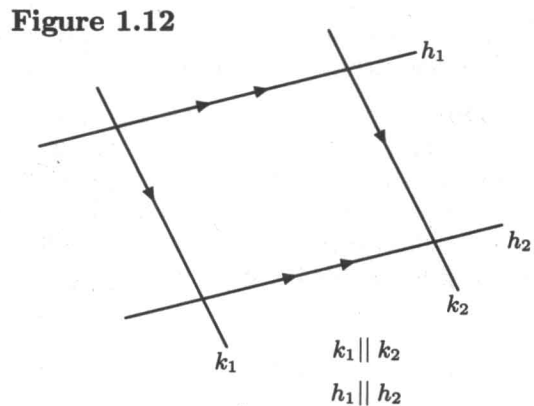


Two lines are **parallel** if they lie in the same plane and they do not intersect. Two line segments are parallel if the lines that contain those segments are parallel. Suppose lines  $m_1$  and  $m_2$  are parallel, as shown in Figure 1.11. This fact can be written  $m_1 \parallel m_2$ , where the symbol  $\parallel$  means “is parallel to”. Lines  $j$  and  $k$  are not parallel, but intersect at some point to the right of the drawing. Because  $m_1 \parallel m_2$ , and since  $PS$  and  $RQ$  are segments of lines  $m_1$  and  $m_2$ , respectively, then each of these statements also is true:

$$PS \parallel QR \quad PS \parallel m_2 \quad m_1 \parallel QR$$



Unless information is given that two lines (or line segments) are parallel, then, even though the lines look as if they are parallel in a drawing you should not assume that they are. It is possible that lines that appear to be parallel actually intersect at some distant point. If it has been established (or if it is given) that two lines are parallel, then this fact can (and should) be indicated on the drawing by imbedding an arrow in each line of the parallel pair. Figure 1.12 shows two examples of this notation:  $k_1$  and  $k_2$  are parallel, as indicated by a single arrow imbedded in each line;  $h_1$  and  $h_2$  also are parallel, as indicated by two arrows imbedded in each line.



Some geometry problems (both in this book and in “real life”) are given without any accompanying drawing. In such cases, your first goal should be to draw a picture that properly shows all of the given information. Segments with known lengths should be drawn “to scale”: if, say,  $AB$  is given to be longer than  $CD$ , then your drawing should show that. Any segment having a known length should be labeled with that length, for after your drawing is complete you will then know that any segment without a labeled length has an “unknown” length. Lines or segments that are known to be parallel should be drawn so that they do not appear to intersect even if they were extended, and don’t forget to draw the arrows that indicate the lines are parallel. The better your drawing, the better your chances of properly judging the reasonableness of any answers.

Suppose a drawing is to show a couple of line segments, but no information is given about the lengths of the segments, or whether two segments are parallel or not. In such a case, your drawing should be made as non-specific as possible: do not draw the segments so that they appear to have the same length, and do not draw them so that they appear to be parallel, for looking at such a drawing might cause you to think that they have equal lengths or that they are parallel, and thus you might be misled during the solving of the problem. As a problem is solved, information may become available that might make you want to alter your drawing. Sometimes an alteration will not require more than appending more segments or labels to your existing drawing. However, a change could be so major that it might be best to make a fresh start. Begin a completely new drawing that will accurately show any given facts and any facts that you have deduced from the given information.

A final bit of advice: don’t become discouraged. As you practice and gain experience, making an adequate drawing in a reasonable amount of time will certainly become easier.

---



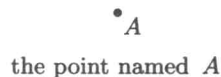
---

## Chapter Summary

A **point** is a location in space.

A point has no size.

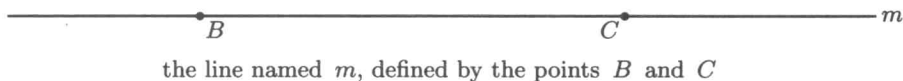
A point is named with a capital letter.



A **line** (or **straight line**) extends forever in opposite directions.

Two points define a unique line.


A line can be named using a lowercase letter (perhaps with a subscript).



A **line segment** is part of a line: two points (the endpoints) together with that part of the line between the endpoints.

A line segment has a measure: its length.

A line segment is named by naming its endpoints.



Some commonly-used **standard units of length** include the following:

### Metric System:

millimeter	$\rightarrow \leftarrow 1 \text{ mm}$	
centimeter	$\leftarrow 1 \text{ cm} \rightarrow$	1 cm = 10 mm
meter		1 m = 100 cm
kilometer		1 km = 1000 m

### British System:

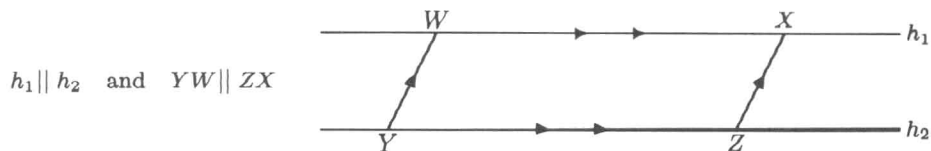
inch	$\leftarrow 1 \text{ in} \rightarrow$
foot	1 ft = 12 in
yard	1 yd = 3 ft
mile	1 mi = 5280 ft

An exact conversion between the Metric and British systems: 1 in = 2.54 cm

Two lines (or line segments) are **parallel** if they do not intersect  
(even if extended indefinitely).

$\parallel$  is the symbol for “is parallel to”.

An arrow (or two arrows) embedded in each of a pair of lines in a drawing indicates that those lines are parallel.



---

---


## Exercises 1

The answers to each set of exercises will be found in a box immediately after the exercise set.

An exercise is identified with the symbol  $\textcircled{C}$  if the solving would be significantly easier with the help of a calculator.

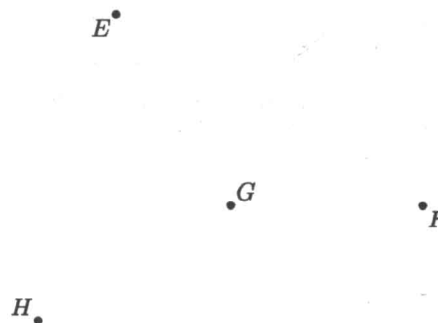
1. In the figure, points  $A$ ,  $B$ ,  $C$ , and  $D$  are marked and labeled. Alter the drawing, by sketching and labeling each of the following:

- line  $n$ , which contains  $A$  and  $B$
- $l$ , which contains  $B$  and  $C$
- segment  $AC$
- $BD$
- $E$ , which is the point of intersection of  $AC$  and  $BD$
- $m$ , which contains  $C$  and is parallel to  $BD$
- $F$ , which is the intersection of  $m$  and  $n$
- $G$ , where  $G$  lies on  $BC$ , and  $BG = GC$  ( $G$  can be called the "midpoint" of  $BC$ .)



2. Points  $E$ ,  $F$ ,  $G$ , and  $H$  are shown in the figure below. Alter the drawing, by sketching and labeling each of the following:

- line  $k_1$ , determined by points  $E$  and  $G$
- segment  $GF$
- $HF$
- $X$ , which is the point of intersection of  $HF$  and  $k_1$
- $k_2$ , which contains  $H$  and is parallel to  $GF$
- $Y$ , which is the intersection of  $k_1$  and  $k_2$
- $Z$ , where  $Z$  is the midpoint of  $HY$



3. Indicate on the drawing the known lengths of line segments. Then determine the lengths of the other line segments, and label them on the drawing. (The labeling may require using a brace to properly identify the segment.)

a)  $AB = 7$

$BC = 8$

$AC =$  \_\_\_\_\_



b)  $XZ = 24$

$YZ = 8$

$XY =$  \_\_\_\_\_

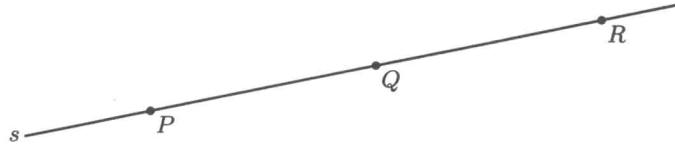


c)  $PR = 18$

$PQ = QR$

$PQ =$  \_\_\_\_\_

$QR =$  \_\_\_\_\_



d)  $UV = 7$

$VW = 3(UV)$

$VW =$  \_\_\_\_\_

$UW =$  \_\_\_\_\_



**Note:**  $VW = 3(UV)$  means that the length of  $VW$  is three times the length of  $UV$ .

e)  $EF = 20$

$HF = 18$

$EG = \frac{1}{4}(EF)$

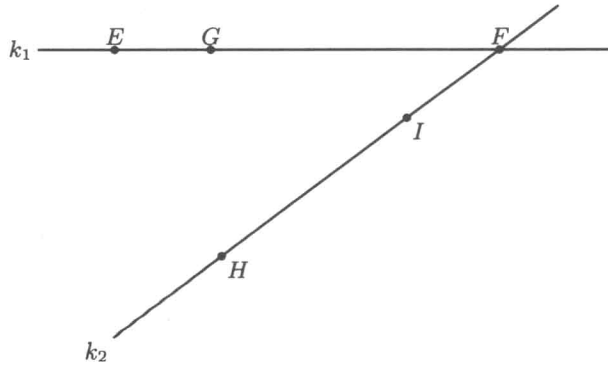
$IF = \frac{1}{3}(HF)$

$GE =$  \_\_\_\_\_

$GF =$  \_\_\_\_\_

$IF =$  \_\_\_\_\_

$HI =$  \_\_\_\_\_



f)  $PR = 12$

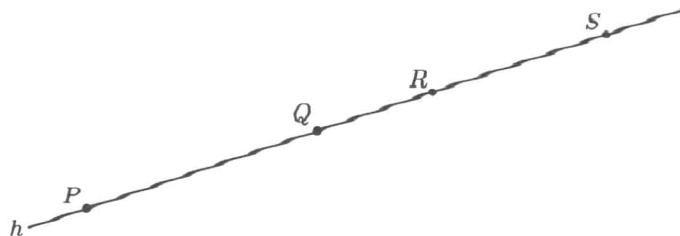
$QR = \frac{1}{3}(PR)$

$RS = \frac{3}{4}(PQ)$

$QR =$  \_\_\_\_\_

$RS =$  \_\_\_\_\_

$PS =$  \_\_\_\_\_



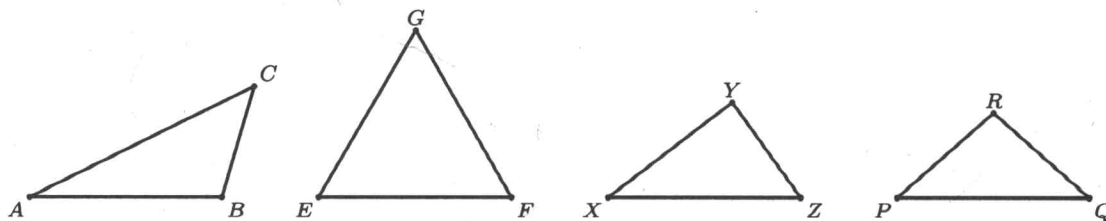
4. Round the given numbers to the requested precision.
- a) Round to the nearest tenth (one digit to the right of the decimal point):
- 1) 4.803      2) 13.0927      3) 83.96      4) 5.6392      5) 0.0796
- b) Round to the nearest hundredth (two digits to the right of the decimal point):
- 1) 34.807      2) 19.0028      3) 3.672      4) 0.158      5) 7.995
- c) Round to the nearest thousandth (three digits to the right of the decimal point):
- 1) 5.5555      2) 7.65432      3) 0.29974      4) 4.39948      5) 0.00038
- d) Round to the nearest whole number. (When rounding to the nearest whole number, a decimal point may be included, but no digits to the right of the decimal point should be written.)
- 1) 7.365      2) 32.47      3) 868.5      4) 27.89      5) 0.3615

© 5. Express each given length using the units requested.

- a) Convert 12 inches into centimeters (exactly).
- b) Convert 0.6 miles into feet (exactly).
- c) Convert 572 meters into kilometers (exactly).
- d) Convert 957 yards into miles (round to the nearest thousandth mile).
- e) Convert 38 millimeters into inches (round to the nearest hundredth inch).
- f) Convert 100 yards into meters (exactly).

6. Three points determine three line segments. Each pair of these segments shares a common endpoint, and (unless all three points happen to lie on the same line) the three segments form a geometric figure called a **triangle**. The three segments are called the “sides” of the triangle. A triangle can be named by giving the names of the three points.

Shown below are four triangles:  $ABC$ ,  $EFG$ ,  $XYZ$ , and  $PQR$ . The triangles are drawn at different scales, but within each triangle the segments have the proper relative lengths.



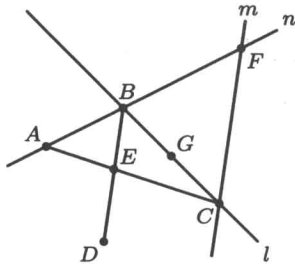
- a) Which would be the best picture of a triangle that has sides of lengths 2 miles, 2 miles, and 2 miles? (Label the sides of the proper triangle with their lengths.)
- b) Which would be the best picture of a triangle that has sides of lengths 80 meters, 80 meters, and 120 meters? (Label the sides of the proper triangle with their lengths.)
- c) Which would be the best picture of a triangle that has sides of lengths 6 feet, 10 feet, and 13 feet? (Label the sides of the proper triangle with their lengths.)
- d) Which would be the best picture of a triangle that has sides of lengths 2 yards, 8 feet, and 3 meters? (Label the sides of the proper triangle with their lengths.)

7. In each case below, use a ruler, and let the units be either inches or centimeters. Draw line segment  $AB$ , of length 3 units, parallel to the top edge of your paper. Experiment until you find the proper location of point  $C$ , so that segments  $AC$  and  $BC$  have the given lengths. (Point  $C$  will have two possible positions; draw  $C$  so that it is above  $AB$ .)
- a)  $AC = 3$   $BC = 3$                       b)  $AC = 3$   $BC = 2$                       c)  $AC = 4$   $BC = 2$
- Ⓒ 8. Express each of these sums in the units requested.
- a) Convert  $5\text{ ft} + 7\text{ yd}$  to feet (exactly).  
 b) Convert  $1\text{ m} + 2\text{ ft}$  to centimeters (exactly).  
 c) Convert  $3\text{ in} + 54\text{ mm}$  to centimeters (exactly).  
 d) Convert  $17\text{ cm} + 2.7\text{ ft}$  to inches. (Round to the nearest tenth of an inch.)
- Ⓒ 9. On the planet Zrozg, standard units of length are blods (abbreviated bl), cluds (cl), and druves (dr). Using the conversion equations  $3\text{ bl} = 5\text{ cl}$  and  $9\text{ cl} = 7\text{ dr}$ , find how many druves will equal a distance of 10 blods. (Express your answer exactly as an improper fraction, and as an approximate decimal rounded to the nearest thousandth druve.)
- Ⓒ 10. A **speed** is a number, together with some “unit of speed”, that describes how much time would be required for an object to move a certain distance, if that object were to move without either “speeding up” or “slowing down” during the trip. Any unit of speed is some unit of length divided by some unit of time, and so can be spoken “length per time” (since the mathematical meaning of “per” is “divided by”). Examples of units of speed are miles/hour (spoken “miles per hour” and abbreviated either  $\frac{\text{mi}}{\text{hr}}$  or mph), meters/second ( $\frac{\text{m}}{\text{sec}}$ ), and kilometers/day ( $\frac{\text{km}}{\text{day}}$ ). Using our length-conversion equations, and some time-conversion equations (such as  $1\text{ day} = 24\text{ hours}$ ,  $1\text{ min} = 60\text{ sec}$ , etc.), speeds can be converted from one unit to another. For example, here is a conversion of  $75\frac{\text{in}}{\text{sec}}$  to feet per minute:
- $$75\frac{\text{in}}{\text{sec}} = \frac{75\text{ in}}{1\text{ sec}} \cdot \frac{1\text{ ft}}{12\text{ in}} \cdot \frac{60\text{ sec}}{1\text{ min}} = \frac{4500\text{ ft}}{12\text{ min}} = 375\frac{\text{ft}}{\text{min}}$$
- a) Convert a speed of 15 inches per second to centimeters per second (exactly).  
 b) Convert a speed of 15 inches per second to inches per minute (exactly).  
 c) Jack drove a distance of 18 miles in 45 minutes. What was his speed in miles per hour (exactly)?  
 d) When travelling at a speed of 60 miles per hour, how many feet do you travel in one second (exactly)?  
 e) It takes a manned satellite about 90 minutes to travel around the earth once. If the distance around the earth is about 25,000 miles, then what is the satellite’s approximate speed in miles per second? (Round to the nearest tenth mile per second.)  
 f) The author of a magazine article stated that a turtle, when in a hurry, could move at a speed of “one furlong per fortnight”. (A furlong is a distance commonly used in horse racing, and equals one-eighth mile. A fortnight is a seldom-used word that means a time interval of two weeks.) From your experience observing turtles, do you believe that this quoted speed is too low, or too high? (Hint: convert the speed into something more familiar, like feet per minute.)

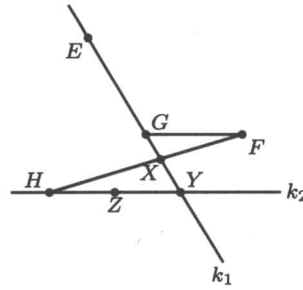


## Answers to Exercises 1

1.



2.



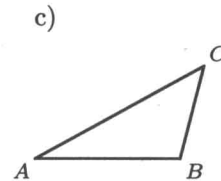
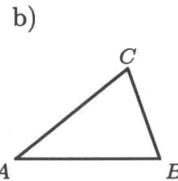
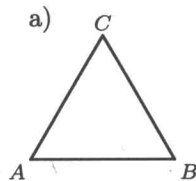
3. a)  $AC = 15$       c)  $PQ = 9$       e)  $GE = 5$       f)  $QR = 4$   
     b)  $XY = 16$       d)  $VW = 21$        $GF = 15$        $RS = 6$   
                              $UR = 9$        $IF = 6$        $PS = 18$   
                              $UV = 28$        $HI = 12$

4. a) 1) 4.8      2) 13.1      3) 84.0      4) 5.6      5) 0.1  
     b) 1) 34.81      2) 19.00      3) 3.67      4) 0.16      5) 8.00  
     c) 1) 5.556      2) 7.654      3) 0.300      4) 4.399      5) 0.000  
     d) 1) 7.      2) 32.      3) 869.      4) 28.      5) 0.

5. a)  $12 \text{ in} = 30.48 \text{ cm}$       b)  $0.6 \text{ mi} = 3168 \text{ ft}$       c)  $572 \text{ m} = 0.572 \text{ km}$   
     d)  $957 \text{ yd} \approx 0.544 \text{ mi}$       e)  $38 \text{ mm} \approx 1.50 \text{ in}$       f)  $100 \text{ yd} = 91.44 \text{ m}$

6. a)  $EFG$ , with  $EF = EG = FG = 2 \text{ mi}$   
     b)  $PQR$ , with  $PQ = 120 \text{ m}$ , and  $PR = RQ = 80 \text{ m}$   
     c)  $ABC$ , with  $BC = 6 \text{ ft}$ ,  $AB = 10 \text{ ft}$ , and  $AC = 13 \text{ ft}$   
     d)  $XYZ$ , with  $YZ = 2 \text{ yd}$ ,  $XY = 8 \text{ ft}$ , and  $XZ = 3 \text{ m}$

7. The triangles will have these shapes:



8. a)  $5 \text{ ft} + 7 \text{ yd} = 26 \text{ ft}$       b)  $1 \text{ m} + 2 \text{ ft} = 160.96 \text{ cm}$   
     c)  $3 \text{ in} + 54 \text{ mm} = 13.02 \text{ cm}$       d)  $17 \text{ cm} + 2.7 \text{ ft} \approx 39.1 \text{ in}$
9.  $10 \text{ bl} = 10 \text{ bl} \cdot \frac{5 \text{ cl}}{3 \text{ bl}} \cdot \frac{7 \text{ dr}}{9 \text{ cl}} = \frac{350}{27} \text{ dr} \approx 12.963 \text{ dr}$
10. a)  $15 \frac{\text{in}}{\text{sec}} = 15 \cdot \frac{1 \text{ in}}{1 \text{ sec}} \cdot \frac{2.54 \text{ cm}}{1 \text{ in}} = 38.1 \frac{\text{cm}}{\text{sec}}$       b)  $15 \frac{\text{in}}{\text{sec}} = 15 \cdot \frac{1 \text{ in}}{1 \text{ sec}} \cdot \frac{60 \text{ sec}}{1 \text{ min}} = 900 \frac{\text{in}}{\text{min}}$   
     c)  $\frac{18 \text{ mi}}{45 \text{ min}} = \frac{18 \text{ mi}}{45 \text{ min}} \cdot \frac{60 \text{ min}}{1 \text{ hr}} = 24 \frac{\text{mi}}{\text{hr}}$       d)  $60 \frac{\text{mi}}{\text{hr}} = \frac{60 \text{ mi}}{1 \text{ hr}} \cdot \frac{5280 \text{ ft}}{1 \text{ mi}} \cdot \frac{1 \text{ hr}}{3600 \text{ sec}} = 88 \frac{\text{ft}}{\text{sec}}$   
     e)  $\frac{25,000 \text{ mi}}{90 \text{ min}} = \frac{25,000 \text{ mi}}{90 \text{ min}} \cdot \frac{1 \text{ min}}{60 \text{ sec}} = \frac{250 \text{ mi}}{54 \text{ sec}} \approx 4.6 \frac{\text{mi}}{\text{sec}}$   
     f)  $1 \frac{\text{furlong}}{\text{fortnight}} = \frac{1 \text{ furlong}}{1 \text{ fortnight}} \cdot \frac{1 \text{ fortnight}}{14 \text{ days}} \cdot \frac{1 \text{ day}}{24 \text{ hr}} \cdot \frac{1 \text{ hr}}{60 \text{ min}} \cdot \frac{1 \text{ mi}}{8 \text{ furlong}} \cdot \frac{5280 \text{ ft}}{1 \text{ mi}} \approx 0.033 \frac{\text{ft}}{\text{min}}$

(Turtles can move much faster than a furlong per fortnight.)