

责任编辑 何黎峰      责任校对 陈云霞  
封面设计 曾国兴      责任印务 邵建民

义务教育课程标准  
**新数学基础天天练**  
三年级上

.....  
● 编    写：杭州现代小学数学教育研究中心  
● 出版发行：浙江教育出版社  
            （杭州市天目山路 40 号 邮编 310013）

.....  
● 印    刷：钱江彩色印务有限公司  
● 开    本：787×1092 1/16  
● 印    张：3.5  
● 字    数：47 000  
● 版    次：2006 年 7 月第 1 版  
● 印    次：2006 年 7 月第 1 次  
● 印    数：15 000  
● 书    号：ISBN 7- 5338- 6393- 3/G·6363  
● 定    价：4.80 元

.....  
联系电话：0571- 85170300- 80928  
e-mail：zjy@zjcb.com  
网址：www.zjeph.com

# 目

CONTENTS

# 录

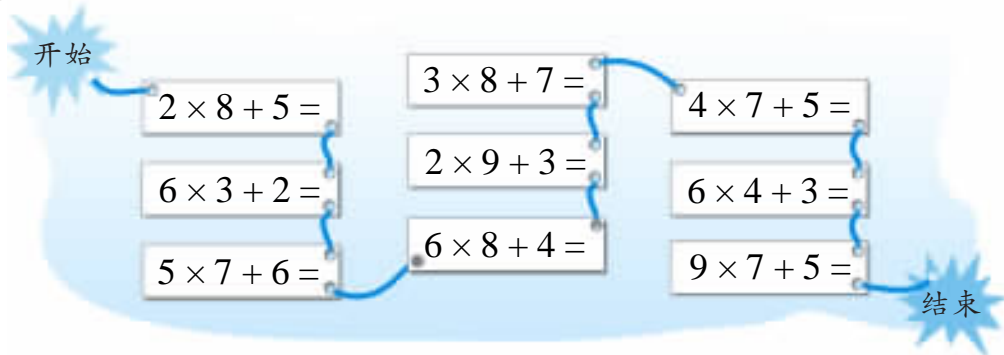


一 花果山上学数学 .....	1
二 快乐的夏令营 .....	17
三 绿色的田野 .....	31
四 美丽的校园 .....	41
五 总复习 .....	48

## 一 花果山上学数学

## [1] 主题图

## 1. 口算。



## 2. 算一算,想一想。

$3 \times 6 =$

$7 \times 4 =$

$8 \times 20 =$

$5 \times 10 =$

$3 \times 2 =$

$7 \times 6 =$

$8 \times 30 =$

$5 \times 90 =$

$3 \times 8 =$

$7 \times 10 =$

$8 \times 50 =$

$5 \times 100 =$

## 3. 在□里填数。

$250 + 45 = \square$

$140 + 42 = \square$

$490 + 56 = \square$

$360 + 48 = \square$

$450 + 54 = \square$

$480 + 24 = \square$

$540 + 27 = \square$

$560 + 72 = \square$

$270 + 54 = \square$

## 4. 解决问题。

(1) 小明有 6 支红铅笔,蓝铅笔的数量是红铅笔的 2 倍。

① 蓝铅笔有多少支?

② 红铅笔和蓝铅笔一共有多少支?

(2) 小丽有 6 支红铅笔,比蓝铅笔多 2 支。


① 蓝铅笔有多少支?

② 红铅笔和蓝铅笔一共有多少支?

[2] 两位数乘一位数(一)

1. 口算。

$3 \times 2 + 1 =$	$1 \times 5 + 3 =$	$2 \times 4 + 1 =$	$3 \times 9 + 6 =$
$4 \times 6 + 5 =$	$3 \times 3 + 2 =$	$1 \times 6 + 4 =$	$6 \times 7 + 3 =$
$8 \times 3 + 2 =$	$2 \times 3 + 2 =$	$40 \times 7 =$	$2 \times 2 + 1 =$



2. 计算。

$30 \times 8 =$   
 $2 \times 8 =$

$20 \times 5 =$   
 $7 \times 5 =$

$10 \times 4 =$   
 $7 \times 4 =$

$30 \times 6 =$   
 $2 \times 6 =$

$60 \times 3 =$   
 $5 \times 3 =$

$80 \times 6 =$   
 $1 \times 6 =$

3. 解决问题。

(1)

A 套餐



10元      1元

B 套餐

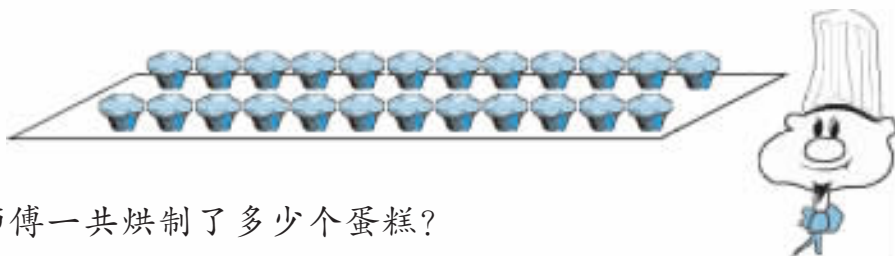


10元      4元

①买3份A套餐要多少元?

②买3份B套餐要多少元?

(2)



师傅一共烘制了多少个蛋糕?

## [3] 两位数乘一位数(二)

1. 算一算,填一填。

$$\begin{aligned} 10 \times 7 &= \\ 3 \times 7 &= \\ 13 \times 7 &= \end{aligned}$$

$$\begin{aligned} 30 \times 4 &= \\ 2 \times 4 &= \\ 32 \times 4 &= \end{aligned}$$

$$\begin{aligned} 20 \times 3 &= \\ 9 \times 3 &= \\ 29 \times 3 &= \end{aligned}$$

2. 在□里填数。

$$\begin{aligned} 26 \times 3 &= 60 + \square \\ &= \square \end{aligned}$$



$$\begin{aligned} 74 \times 2 &= 140 + \square \\ &= \square \end{aligned}$$

$$\begin{aligned} 38 \times 2 &= \square + 16 \\ &= \square \end{aligned}$$

$$\begin{aligned} 19 \times 4 &= \square + 36 \\ &= \square \end{aligned}$$

3. 口算。

$14 \times 3 =$

$13 \times 4 =$

$45 \times 2 =$

$16 \times 5 =$

$15 \times 6 =$

$27 \times 3 =$

$17 \times 4 =$

$48 \times 2 =$

$72 \times 4 =$

$19 \times 3 =$

$13 \times 6 =$

$61 \times 7 =$

$12 \times 6 =$

$15 \times 4 =$

$63 \times 3 =$

$36 \times 2 =$

4. 解决问题。

家里要来客人了,奶奶买了下面一些东西。

品名	湖蟹	山核桃	巧克力	提子
每500克售价/元	37	32	34	18
质量/克	$500 \times 4$	$500 \times 2$	$500 \times 2$	$500 \times 3$

(1) 买巧克力花了多少元钱?

(2) 买湖蟹花了多少元钱?

(3) 你还能提出什么数学问题? 能解答吗?

问题: \_\_\_\_\_

算式: \_\_\_\_\_

[4] 练一练(1)

1. 在□里填数。

$12 \times$	$\begin{array}{ c } \hline 2 \\ \hline \end{array}$	$=$	$\begin{array}{ c } \hline \square \\ \hline \end{array}$		$15 \times$	$\begin{array}{ c } \hline 3 \\ \hline \end{array}$	$=$	$\begin{array}{ c } \hline \square \\ \hline \end{array}$
	$\begin{array}{ c } \hline 3 \\ \hline \end{array}$		$\begin{array}{ c } \hline \square \\ \hline \end{array}$			$\begin{array}{ c } \hline 4 \\ \hline \end{array}$		$\begin{array}{ c } \hline \square \\ \hline \end{array}$
	$\begin{array}{ c } \hline 4 \\ \hline \end{array}$		$\begin{array}{ c } \hline \square \\ \hline \end{array}$			$\begin{array}{ c } \hline 5 \\ \hline \end{array}$		$\begin{array}{ c } \hline \square \\ \hline \end{array}$
	$\begin{array}{ c } \hline 5 \\ \hline \end{array}$		$\begin{array}{ c } \hline \square \\ \hline \end{array}$			$\begin{array}{ c } \hline 7 \\ \hline \end{array}$		$\begin{array}{ c } \hline \square \\ \hline \end{array}$
	$\begin{array}{ c } \hline 6 \\ \hline \end{array}$		$\begin{array}{ c } \hline \square \\ \hline \end{array}$			$\begin{array}{ c } \hline 8 \\ \hline \end{array}$		$\begin{array}{ c } \hline \square \\ \hline \end{array}$

2. 计算。

$300 \times 4 =$   
 $20 \times 4 =$   
 $1 \times 4 =$

$400 \times 2 =$   
 $30 \times 2 =$   
 $5 \times 2 =$

$100 \times 7 =$   
 $50 \times 7 =$   
 $2 \times 7 =$

3. 算一算, 填一填。

17	×	4	=	□
×				
3	×	68	=	□
=		×		
	×	6	=	□
		=		□



完成这题的计算,  
你花了多少时间?

79	×	4	=	□
×		×		
7	×	58	=	□
=		=		

## [5] 交换律

## 1. 口算。

(1) $3 \times 6 + 2 =$	$7 \times 4 + 2 =$	$3 \times 9 + 7 =$	
$4 \times 9 + 8 =$	$1 \times 8 + 3 =$	$5 \times 7 + 4 =$	
$8 \times 8 + 7 =$	$2 \times 9 + 6 =$	$2 \times 4 + 3 =$	
(2) $13 \times 4 =$	$25 \times 4 =$	$36 \times 4 =$	$54 \times 2 =$
$29 \times 3 =$	$19 \times 7 =$	$17 \times 9 =$	$38 \times 5 =$
$16 \times 6 =$	$13 \times 5 =$	$39 \times 6 =$	$53 \times 8 =$

## 2. 在□里填数。

$$22 \times 8 = 160 + \square$$

$$= \square$$

$$26 \times 5 = 100 + \square$$

$$= \square$$

$$34 \times 7 = 210 + \square$$

$$= \square$$

$$38 \times 5 = 150 + \square$$

$$= \square$$

$$63 \times 6 = \square + 18$$

$$= \square$$

$$67 \times 2 = \square + 14$$

$$= \square$$

$$79 \times 6 = \square + 54$$

$$= \square$$

$$83 \times 7 = \square + 21$$

$$= \square$$

$$52 \times 8 = 400 + \square$$

$$= \square$$

$$46 \times 5 = \square + 30$$

$$= \square$$

## 3. 算一算,比一比。

$18 + 3 =$

$25 \times 7 =$

$4 \times 26 =$

$240 + 54 =$

$3 + 18 =$

$7 \times 25 =$

$26 \times 4 =$

$54 + 240 =$

$75 \times 4 =$

$360 + 30 =$

$24 \times 5 =$

$24 \times 6 =$

$4 \times 75 =$

$30 + 360 =$

$5 \times 24 =$

$6 \times 24 =$

你发现了  
什么?



[6] 结合律

1. 在□里填数。

$$24 \times 6 = 120 + \square$$

$$= \square$$

$$27 \times 5 = 100 + \square$$

$$= \square$$

$$85 \times 7 = \square + 35$$

$$= \square$$

$$88 \times 8 = \square + 64$$

$$= \square$$

$$25 \times 8 = 160 + \square$$

$$= \square$$

$$67 \times 5 = \square + 35$$

$$= \square$$

$$73 \times 4 = 280 + \square$$

$$= \square$$

$$54 \times 4 = \square + 16$$

$$= \square$$

$$93 \times 5 = 450 + \square$$

$$= \square$$

$$75 \times 9 = \square + 45$$

$$= \square$$

2. 口算。

$90 + 18 =$

$12 \times 9 =$

$80 + 32 =$

$14 \times 8 =$

$80 + 24 =$

$13 \times 8 =$

$60 + 42 =$

$17 \times 6 =$

$60 + 27 =$

$29 \times 3 =$

$70 + 42 =$

$16 \times 7 =$

$90 + 12 =$

$34 \times 3 =$

$60 + 54 =$

$19 \times 6 =$

$50 + 35 =$

$17 \times 5 =$

3. 算一算,比一比。

$4 + 5 + 6 =$

$4 + 6 + 5 =$

$4 + (5 + 6) =$

$7 \times 8 \times 5 =$

$5 \times 8 \times 7 =$

$7 \times (8 \times 5) =$

$25 \times 4 \times 3 =$

$25 \times 3 \times 4 =$

$3 \times (4 \times 25) =$

$23 + 27 + 50 =$

$23 + 50 + 27 =$

$23 + (27 + 50) =$

## [7] 简便计算

### 1. 口算。

$60 - 7 \times 8 =$

$40 - 8 \times 4 =$

$68 \div 2 \div 2 =$

$9 \times 7 - 13 =$

$36 + 54 \div 3 =$

$67 + 69 \div 3 =$

$39 - 38 \div 2 =$

$50 - 95 \div 5 =$

$9 \times 8 + 28 =$

$48 \div 4 + 24 =$

$39 \div 3 - 6 =$

$40 + 20 - 15 =$

$12 + 8 \times 6 =$

$3 \times 8 \div 4 =$

$52 \div 4 \times 6 =$

$3 \times 8 \div 4 =$

$52 \div 4 \times 6 =$

$2 \times 5 \times 4 =$

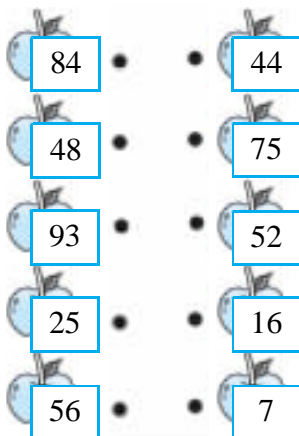
$8 \times 5 \times 2 =$

$100 \div 4 \div 5 =$

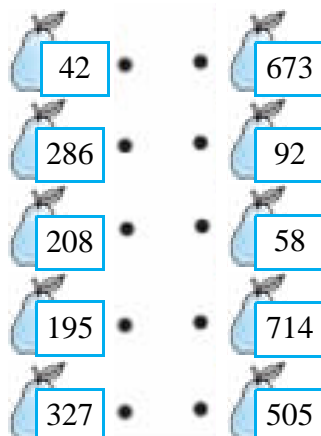
$80 - 15 + 25 =$

### 2. 将和是整百、整千的两个数用线连起来。

(1)



(2)



### 3. 算一算,比一比。

$16 \times 4 \times 10 =$

$25 \times 3 \times 4 =$

$24 \times 3 \times 10 =$

$16 \times 5 \times 8 =$

$25 \times 4 \times 3 =$

$24 \times 5 \times 6 =$

$125 + 88 + 75 =$

$27 \times 2 \times 5 =$

$94 + 32 + 68 =$

$125 + 75 + 88 =$

$27 \times (2 \times 5) =$

$94 + (32 + 68) =$

### 4.



45 千克    38 千克    55 千克

这些桃子一共有多少千克?



[8] 练一练(2)

1. 口算。

$12 \times 8 =$      $14 \times 3 =$      $13 \times 6 =$      $16 \times 3 =$      $25 \times 5 =$

$34 \times 2 =$      $26 \times 3 =$      $15 \times 6 =$      $17 \times 4 =$      $35 \times 3 =$

$59 \times 2 =$      $11 \times 8 =$      $18 \times 3 =$      $16 \times 6 =$      $18 \times 5 =$

$17 \times 2 =$      $12 \times 6 =$      $24 \times 3 =$      $15 \times 5 =$      $14 \times 6 =$

$16 \times 4 =$      $13 \times 7 =$      $29 \times 3 =$      $45 \times 5 =$      $17 \times 3 =$

$12 \times 7 =$      $30 \times 8 =$      $25 \times 4 =$      $36 \times 2 =$      $19 \times 5 =$

$16 \times 7 =$      $18 \times 6 =$      $21 \times 5 =$      $15 \times 9 =$      $15 \times 7 =$

$17 \times 5 =$      $33 \times 6 =$      $27 \times 3 =$      $18 \times 8 =$      $36 \times 4 =$

2. 算一算,比一比。

$35 \times 6 =$   
 $35 \times 60 =$

$68 \times 2 =$   
 $68 \times 20 =$

$57 \times 4 =$   
 $57 \times 40 =$

3. 在□里填数。

$42 + \square = 100$

$77 + \square = 100$

$158 + \square = 1000$

$65 + \square = 100$

$38 + \square = 100$

$524 + \square = 1000$

$26 + \square = 100$

$59 + \square = 100$

$461 + \square = 1000$

$87 + \square = 100$

$43 + \square = 100$

$812 + \square = 1000$

$97 + \square = 100$

$85 + \square = 100$

$216 + \square = 1000$

$\square + 14 = 100$

$\square + 74 = 100$

$\square + 653 = 1000$

$\square + 23 = 100$

$\square + 39 = 100$

$\square + 702 = 1000$

4. 解决问题。

(1) 同学们的植树情况如右表。

同学们一共植树多少棵?

年 级	四	五	六
植树/棵	38	54	62

(2) 杨树苗每棵 8 元,每 12 棵捆成 1 捆。买这样的 5 捆,一共要多少元?

## [9] 三位数乘一位数(一)

1. 在□里填数。

$$\begin{aligned} 23 \times 8 &= 160 + \square \\ &= \square \end{aligned}$$

$$\begin{aligned} 54 \times 7 &= \square + 28 \\ &= \square \end{aligned}$$

$$\begin{aligned} 27 \times 6 &= 120 + \square \\ &= \square \end{aligned}$$

$$\begin{aligned} 59 \times 4 &= \square + 36 \\ &= \square \end{aligned}$$

$$\begin{aligned} 29 \times 5 &= 100 + \square \\ &= \square \end{aligned}$$

$$\begin{aligned} 64 \times 6 &= \square + 24 \\ &= \square \end{aligned}$$

$$\begin{aligned} 32 \times 9 &= 270 + \square \\ &= \square \end{aligned}$$

$$\begin{aligned} 66 \times 3 &= \square + 18 \\ &= \square \end{aligned}$$

$$\begin{aligned} 46 \times 3 &= 120 + \square \\ &= \square \end{aligned}$$

$$\begin{aligned} 69 \times 5 &= \square + 45 \\ &= \square \end{aligned}$$

$$\begin{aligned} 35 \times 4 &= 120 + \square \\ &= \square \end{aligned}$$

$$\begin{aligned} 72 \times 9 &= \square + 18 \\ &= \square \end{aligned}$$

$$\begin{aligned} 39 \times 7 &= 210 + \square \\ &= \square \end{aligned}$$

$$\begin{aligned} 75 \times 2 &= \square + 10 \\ &= \square \end{aligned}$$

$$\begin{aligned} 44 \times 8 &= 320 + \square \\ &= \square \end{aligned}$$

$$\begin{aligned} 78 \times 6 &= \square + 48 \\ &= \square \end{aligned}$$

$$\begin{aligned} 25 \times 5 &= 100 + \square \\ &= \square \end{aligned}$$

$$\begin{aligned} 75 \times 5 &= \square + 25 \\ &= \square \end{aligned}$$

2. 计算。

$100 \times 6 =$

$30 \times 6 =$

$5 \times 6 =$

$130 \times 6 =$

$5 \times 6 =$

$100 \times 6 =$

$35 \times 6 =$

$200 \times 3 =$

$10 \times 3 =$

$8 \times 3 =$

$210 \times 3 =$

$8 \times 3 =$

$200 \times 3 =$

$18 \times 3 =$

1. 口算。

$15 \times 5 =$	$17 \times 3 =$	$24 \times 2 =$	$47 \times 3 =$
$18 \times 6 =$	$14 \times 5 =$	$29 \times 3 =$	$16 \times 4 =$
$12 \times 5 =$	$15 \times 2 =$	$34 \times 3 =$	$78 \times 2 =$
$14 \times 9 =$	$19 \times 3 =$	$14 \times 4 =$	$18 \times 3 =$
$25 \times 4 =$	$36 \times 2 =$	$37 \times 3 =$	$95 \times 2 =$
$24 \times 5 =$	$16 \times 6 =$	$32 \times 5 =$	$23 \times 6 =$
$15 \times 8 =$	$25 \times 6 =$	$17 \times 6 =$	$19 \times 4 =$
$12 \times 6 =$	$16 \times 5 =$	$39 \times 2 =$	$14 \times 7 =$
$24 \times 3 =$	$26 \times 3 =$	$27 \times 3 =$	$19 \times 6 =$
$28 \times 4 =$	$12 \times 9 =$	$21 \times 5 =$	$13 \times 4 =$

2. 计算。

$$\begin{aligned} 270 \times 3 = \\ 3 \times 3 = \\ 273 \times 3 = \end{aligned}$$

$$\begin{aligned} 180 \times 5 = \\ 1 \times 5 = \\ 181 \times 5 = \end{aligned}$$

$$\begin{aligned} 200 \times 4 = \\ 19 \times 4 = \\ 219 \times 4 = \end{aligned}$$

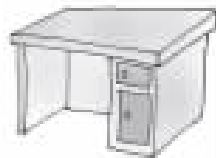
$$\begin{aligned} 300 \times 2 = \\ 46 \times 2 = \\ 346 \times 2 = \end{aligned}$$

$$\begin{aligned} 250 \times 3 = \\ 2 \times 3 = \\ 252 \times 3 = \end{aligned}$$

$$\begin{aligned} 100 \times 7 = \\ 13 \times 7 = \\ 113 \times 7 = \end{aligned}$$

3. 解决问题。

(1) 1 张桌子的价格是 1 把椅子的 3 倍。这张桌子要多少元钱?



(2) 买 1 把椅子和 1 张桌子一共要多少元钱?



228 元

## [11] 练一练(3)

1. 在□里填数。

$$26 \times 7 = 140 + \square$$

$$= \square$$

$$29 \times 6 = 120 + \square$$

$$= \square$$

$$34 \times 4 = 120 + \square$$

$$= \square$$

$$39 \times 5 = 150 + \square$$

$$= \square$$

$$42 \times 9 = 360 + \square$$

$$= \square$$

$$48 \times 3 = 120 + \square$$

$$= \square$$

$$53 \times 7 = 350 + \square$$

$$= \square$$

$$28 \times 5 = 100 + \square$$

$$= \square$$

$$63 \times 7 = \square + 21$$

$$= \square$$

$$67 \times 4 = \square + 28$$

$$= \square$$

$$79 \times 3 = \square + 27$$

$$= \square$$

$$72 \times 8 = \square + 16$$

$$= \square$$

$$76 \times 6 = \square + 36$$

$$= \square$$

$$83 \times 9 = \square + 27$$

$$= \square$$

$$86 \times 4 = \square + 24$$

$$= \square$$

$$36 \times 9 = \square + 54$$

$$= \square$$

2. 填表。

(1)		衬 衣	毛 衣	羽绒衣
	单价/元	168	258	599
	数量/件	3	4	7
	总价/元			

(2)		步 行	自 行 车	小 轿 车
	速度/(米/分)	55	195	1250
	时间/分	10	8	8
	路程/米			

[12] 三位数乘一位数(三)

1. 口算。

$22 \times 9 =$	$23 \times 6 =$	$23 \times 7 =$	$27 \times 7 =$
$24 \times 7 =$	$32 \times 8 =$	$34 \times 8 =$	$32 \times 6 =$
$39 \times 4 =$	$38 \times 4 =$	$36 \times 4 =$	$43 \times 8 =$
$43 \times 4 =$	$44 \times 9 =$	$44 \times 3 =$	$46 \times 8 =$
$48 \times 6 =$	$53 \times 4 =$	$52 \times 9 =$	$53 \times 5 =$
$57 \times 5 =$	$57 \times 4 =$	$57 \times 7 =$	$59 \times 2 =$
$59 \times 6 =$	$62 \times 8 =$	$62 \times 7 =$	$64 \times 3 =$
$66 \times 7 =$	$64 \times 9 =$	$66 \times 9 =$	$69 \times 2 =$
$68 \times 4 =$	$69 \times 7 =$	$73 \times 8 =$	$73 \times 5 =$
$72 \times 6 =$	$77 \times 5 =$	$76 \times 9 =$	$76 \times 3 =$
$79 \times 6 =$	$79 \times 2 =$	$78 \times 5 =$	$82 \times 7 =$
$82 \times 6 =$	$85 \times 9 =$	$87 \times 9 =$	$84 \times 8 =$
$45 \times 5 =$	$29 \times 6 =$	$42 \times 8 =$	$33 \times 4 =$

2. 在□里填数。

$200 \times 7 = \square$

$400 \times 6 = \square$

$500 \times 5 = \square$

$50 \times 7 = \square$

$90 \times 6 = \square$

$40 \times 5 = \square$

$6 \times 7 = \square$

$8 \times 6 = \square$

$7 \times 5 = \square$

$300 \times 8 = \square$

$100 \times 3 = \square$

$400 \times 4 = \square$

$60 \times 8 = \square$

$90 \times 3 = \square$

$90 \times 4 = \square$

$9 \times 8 = \square$

$5 \times 3 = \square$

$8 \times 4 = \square$

## [13] 解决问题

## 1. 口算。

$5 + 6 \times 8 =$

$6 + 8 \times 8 =$

$4 + 6 \times 6 =$

$3 + 3 \times 9 =$

$2 + 7 \times 7 =$

$5 + 7 \times 8 =$

$3 + 8 \times 6 =$

$7 + 7 \times 8 =$

$8 + 7 \times 9 =$

$4 + 8 \times 7 =$

$20 - 2 \times 7 =$

$34 - 4 \times 7 =$

$13 - 3 \times 4 =$

$10 - 4 \times 2 =$

$32 - 4 \times 7 =$

$45 - 6 \times 7 =$

$37 - 5 \times 7 =$

$24 - 7 \times 3 =$

$50 - 8 \times 6 =$

$10 + 5 \times 9 =$

$6 + 4 \times 8 =$

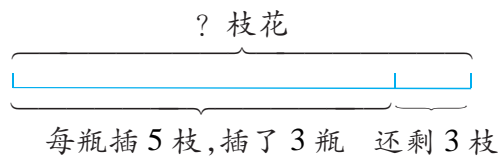
$31 - 3 \times 8 =$

$60 - 6 \times 8 =$

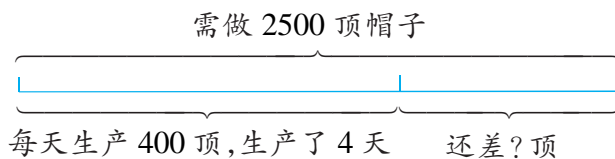
$3 + 6 \times 7 =$

## 2. 看图列式计算。

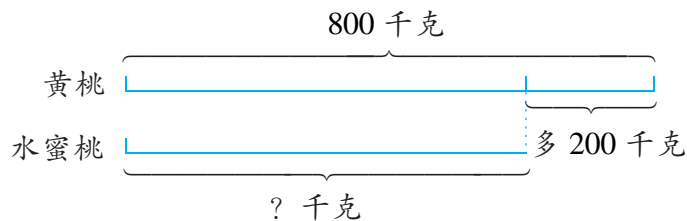
(1)



(2)

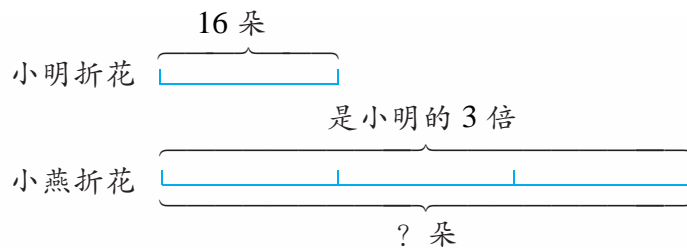


(3)



如果要计算“黄桃和水蜜桃一共有多少千克”,你会算吗?

(4)



如果要计算“小燕比小明多折多少朵花”,你会算吗?

[14] 练一练(4)

1. 口算。

$90 + 18 =$

$90 + 27 =$

$18 \times 8 =$

$12 \times 9 =$

$13 \times 9 =$

$15 \times 9 =$

$80 + 32 =$

$90 + 81 =$

$17 \times 8 =$

$14 \times 8 =$

$19 \times 9 =$

$15 \times 7 =$

$60 + 42 =$

$80 + 40 =$

$19 \times 8 =$

$17 \times 6 =$

$15 \times 8 =$

$18 \times 7 =$

$90 + 12 =$

$90 + 72 =$

$38 \times 3 =$

$34 \times 4 =$

$18 \times 9 =$

$19 \times 7 =$

$60 + 27 =$

$90 + 54 =$

$18 \times 6 =$

$29 \times 3 =$

$36 \times 3 =$

$16 \times 8 =$

$80 + 24 =$

$90 + 36 =$

$17 \times 7 =$

$13 \times 8 =$

$14 \times 9 =$

$17 \times 9 =$

$70 + 42 =$

$90 + 21 =$

$13 \times 7 =$

$16 \times 7 =$

$37 \times 3 =$

$17 \times 4 =$

$60 + 54 =$

$50 + 40 =$

$16 \times 9 =$

$19 \times 6 =$

$18 \times 5 =$

$34 \times 3 =$

$27 \times 4 =$

$80 + 48 =$

$25 \times 3 =$

$17 \times 5 =$

2. 解决问题。

(1) 菜场运来青菜 500 千克,运来的萝卜比青菜少 100 千克。运来青菜和萝卜一共多少千克?

(2) 聪聪体重 32 千克,爸爸的体重是聪聪的 2 倍。如果电梯最多还可载重 100 千克,他们能一起乘上这辆电梯吗?



(3) 第一车间本月生产电视机 1000 台,比上月多生产 100 台。这两个月一共生产电视机多少台?

## [15] 练一练(5)

## 1. 计算。

$290 \times 3 =$

$6 \times 3 =$

$500 \times 2 =$

$38 \times 2 =$

$538 \times 2 =$

$200 \times 3 =$

$96 \times 3 =$

$380 \times 6 =$

$4 \times 6 =$

$384 \times 6 =$

$206 \times 3 =$

$90 \times 3 =$

$207 \times 4 =$

$20 \times 4 =$

$227 \times 4 =$

## 2. 算一算,比一比。

(1) 白糖有 500 千克,红糖比白糖少 5 千克。红糖和白糖一共有多少千克?

(2) 白糖有 500 千克,比红糖少 5 千克。红糖和白糖一共有多少千克?

(3) 白糖有 500 千克,红糖的质量是白糖的 5 倍。红糖和白糖一共有多少千克?

(4) 白糖有 500 千克,是红糖质量的 5 倍。红糖和白糖一共有多少千克?

## 3. 看图列式计算。

