



魔力铅笔

爱学数学

下



浙江少年儿童出版社



魔力铅笔

爱学数学

下

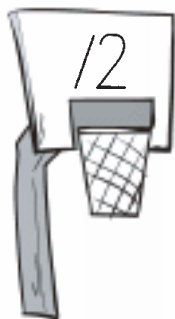
朱惠芳 编
浙江少年儿童出版社





20 以内进位加法(一)

请把篮球投进合适的篮圈。



$8+4=$

$9+3=$

$6+6=$

$6+8=$


$5+9=$

$7+7=$

$8+7=$

$9+6=$

$6+9=$





20 以内进位加法(二)





看图列算式并计算。

	$8 + 3 = //$
	$\square + \square = \square$
	$\square + \square = \square$
	$\square + \square = \square$



20 以内进位加法(三)

请把南瓜装进合适的车子里。





20 以内进位加法(四)





算一算。

9		4		13
4		8		
8		6		
6		7		
7	+	5	=	
3		9		
5		8		
2		9		



20 以内退位减法(一)







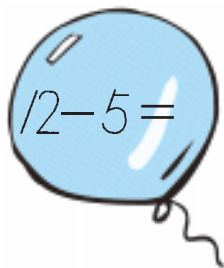

看图列算式并计算。

	$\square - 3 = 8$
	$\square - \square = \square$
	$\square - \square = \square$
	$\square - \square = \square$



20 以内退位减法(二)

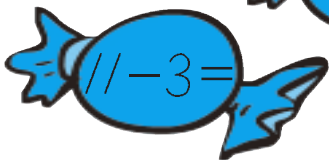
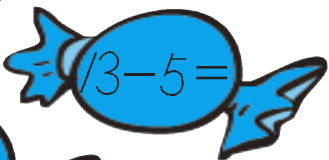
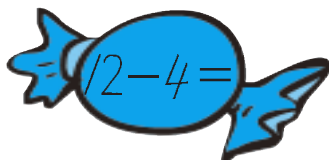
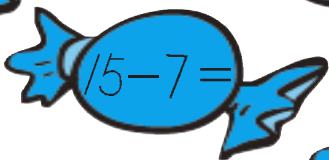
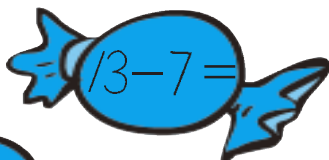
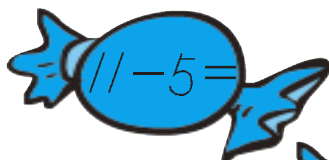
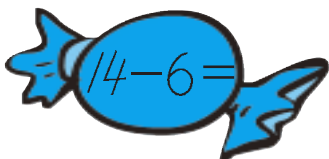
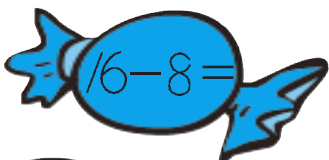
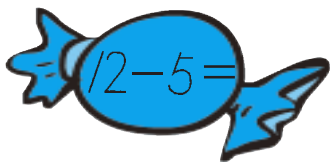
算一算。





20 以内退位减法(三)

请把糖果放进合适的糖罐里。





20 以内退位减法(四)

算一算。

$12 - 3 = \square$

$14 - 6 = \square$

$11 - 9 = \square$

$12 - 7 = \square$

$15 - 8 = \square$

$16 - 8 = \square$

$13 - 6 = \square$

$17 - 8 = \square$

$15 - 8 = \square$

$12 - 4 = \square$

$14 - 7 = \square$

$12 - 6 = \square$

$12 - 4 = \square$

$17 - 9 = \square$

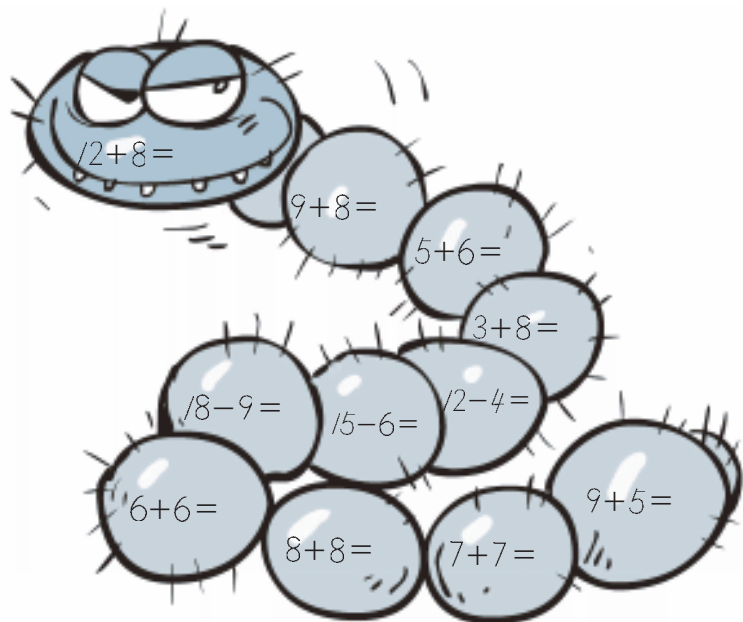
$17 - 9 = \square$

$11 - 8 = \square$



练习 1

1. 请计算毛毛虫身上算式的答案。



2. 请你来当小老师。

$7+5=11$

$12-8=3$

$15-9=6$

$3+9=12$

$8+7=14$

$13-5=8$

$14-8=6$

$7+9=18$



练习 2

1. 算一算，填一填。

4	+ 7 =	//	13	- 4 =	9
5			14		
6			15		
7			16		
8			17		

2. 请将算式和正确的答案连线。

$8 + 3 =$

$11 - 9 =$

$4 + 9 =$

$12 - 6 =$

$5 + 7 =$

$15 - 7 =$

13

6

11

2

8

12

$17 - 15 =$

$8 + 4 =$

$19 - 13 =$

$6 + 5 =$

$11 - 3 =$

$7 + 6 =$



练习 3

请算出每样物品的价钱。



$13 - 7 = \quad \text{元}$



$11 - 8 = \quad \text{元}$



$9 + 9 = \quad \text{元}$



$15 - 7 = \quad \text{元}$



$16 - 7 = \quad \text{元}$



$2 + 9 = \quad \text{元}$



$7 + 8 = \quad \text{元}$



$11 - 2 = \quad \text{元}$



$4 + 8 = \quad \text{元}$



$3 + 9 = \quad \text{元}$



练习 4

请把能够配对的泡泡用线连起来。

$$7+7=$$

$$9+8=$$

$$8+8=$$

$$7+8=$$

$$3+9=$$

$$9+4=$$

$$5+6=$$

$$14$$

$$12$$

$$16$$

$$11$$

$$15$$

$$17$$

$$13$$



认识人民币(一)

你知道这些硬币和纸币的金额吗? 请用线连一连。



5角




1元



10元



1元

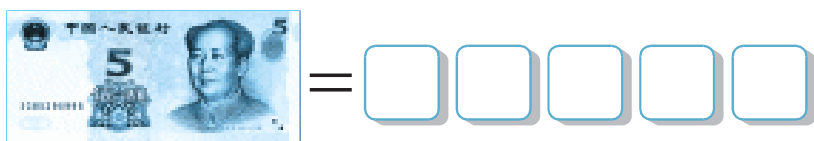
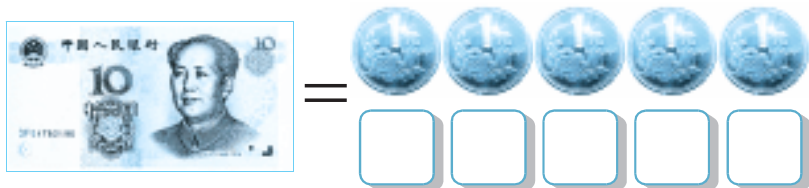
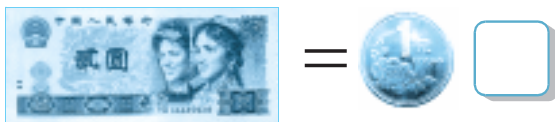


5元



认识人民币(二)

想一想,画一画。





认识人民币(三)

算一算, 这些物品的价格分别是多少?



$$\text{Two 1-yuan coins} + \text{Two 1-yuan coins} = \square \text{ 元}$$



$$\text{One 2-yuan note} + \text{One 5-yuan note} = \square \text{ 元}$$



$$\text{Two 5-yuan notes} = \square \text{ 元}$$



$$\text{Two 10-yuan notes} = \square \text{ 元}$$