



魔力铅笔

爱学数学

上



浙江少年儿童出版社



魔力铅笔

爱学数学

上


朱惠芳 编
浙江少年儿童出版社









10 以内点数

数一数，图中的小动物各有几只？请在框内画上相应数量的圆点。



	● ● ●		
			



比较多少

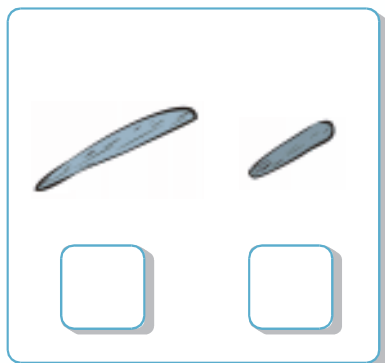
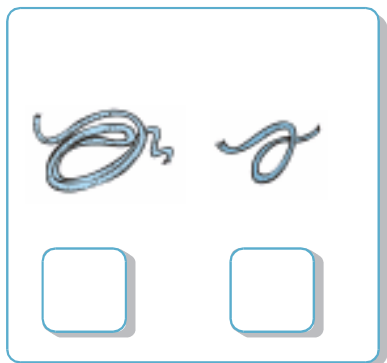
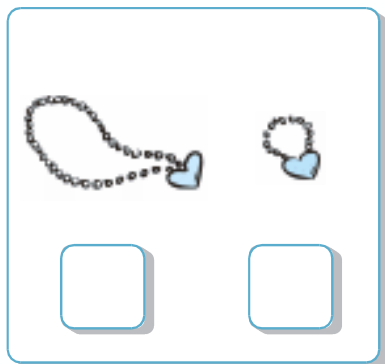
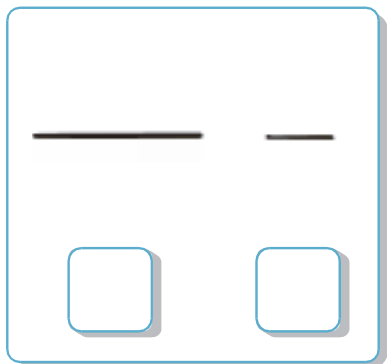
比一比，谁多？谁少？请在数量多的食品旁边的方框内打钩。





比较长短




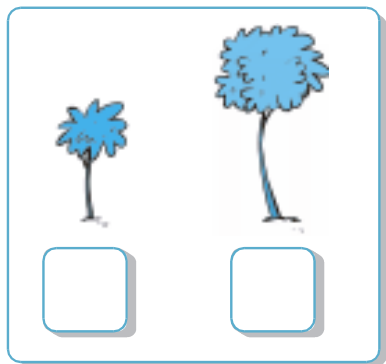
比一比，谁长？谁短？请在长的物体下面的方框内打钩。





比较高矮












比一比，谁高？谁矮？请在高的物体下面的方框内打钩。





练习1

数一数，下面的动物各有几只？请在框内画上相应数量的圆点。



练习 2


哪个数字大，哪个数字小？请给数字大的花朵涂上颜色。





练习 3

想一想, 小兔从哪条路回家最近? 请选出最近的一条, 把它涂上颜色。





认识数字 1~5

请把图和相应的数字连起来。



1



2



3



4



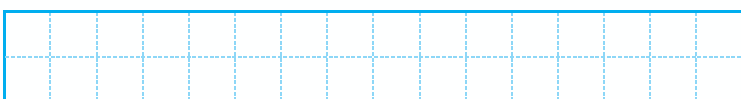


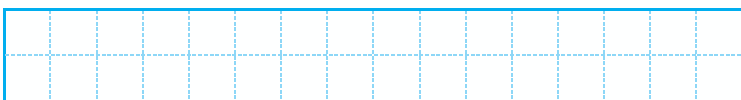
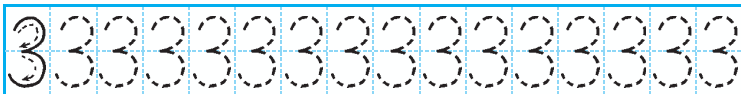
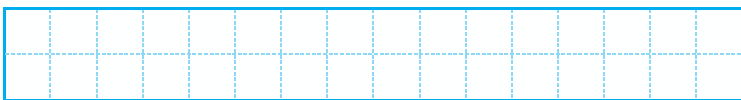
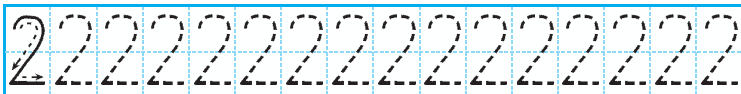
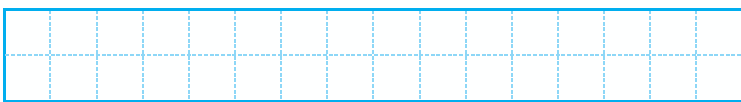
5





学写数字 1~5










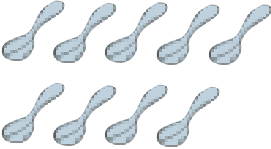
描一描，写一写。





认识数字 6 ~ 10

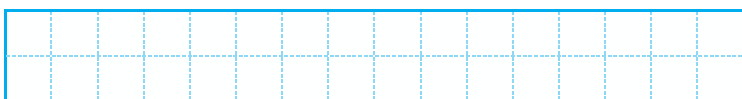

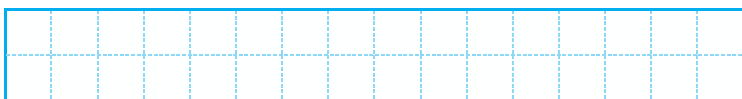

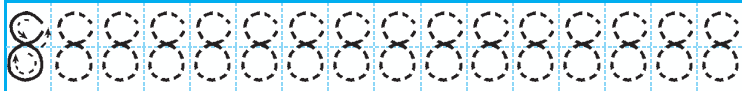
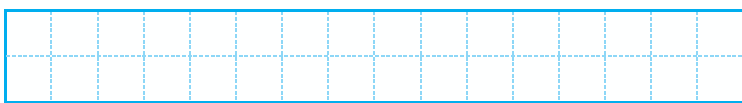
数一数，它们各自有几个？请将正确的数字圈出来。

	6 7 8		4 5 6
	5 6 7		4 5 6
	8 9 10		7 8 9
	7 8 9		8 9 10
	8 9 10		8 9 10



学写数字 6 ~ 10

描一描，写一写。





比较数的大小(5 以内)

谁大, 谁小? 请在大的数字下面的方框内打钩。

Two bears are shown. The bear on the left holds a sign with the number 2. The bear on the right holds a sign with the number 3. Below each bear is a square box for marking.

Two rabbits are shown. The rabbit on the left holds a sign with the number 3. The rabbit on the right holds a sign with the number 4. Below each rabbit is a square box for marking.



Three horses are shown. The horse on the left holds a sign with the number 2. The horse in the middle holds a sign with the number 5. The horse on the right holds a sign with the number 4. Below each horse is a square box for marking.

Three mice are shown. The mouse on the left holds a sign with the number 4. The mouse in the middle holds a sign with the number 3. The mouse on the right holds a sign with the number 5. Below each mouse is a square box for marking.



比较数的大小(6~10)

谁大, 谁小? 请在大的数字下面的方框内打钩。

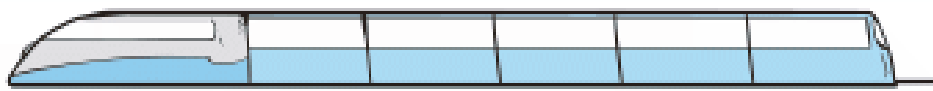




5 以内的序数

请在方框内填上合适的数字。









6~10 的序数

小动物们在草地上排队。你能在它们身后的方框内标上正确的序号吗?

